

7 + Entrance Examination
Sample Paper
Mathematics
Total Marks: 68
Time allowed: 1 hour

Information for parents:

This sample paper has been created for children who are embarking on the 7+ exam. We recommend that these papers are only used in the final run up the exam.

The questions within the paper follow Level 3 of the National Curriculum and cover the entirety of the Year 2 Maths curriculum, therefore we strongly advise that students younger than Year 2 do not attempt these papers.

The papers are designed to be challenging, and it is not expected that students will achieve full marks. Although the 7+ exams are highly competitive, it is important to remember that schools are looking for potential rather than 100% accuracy.

Should you wish for your child to prepare for the 7+ exam before Year 2, we suggest revising individual concepts and playing active Maths games before embarking on more formal revision or sample papers.

Full name

Answer the questions below. You can show your working on the space provided.

1a. $18 - 7 =$

b. $5 + 8 =$

c. $15 - 9 =$

d. $17 + 28 =$

e. $2 \times 3 =$

f. $20 \div 4 =$

6 marks

Fill in the missing numbers.

2a. $\times 3 = 12$

b. $- 9 = 20$

c. $+ 8 = 31$

d. $24 + 5 = 35 -$

e. $18 - 4 = 15 - \square$

f. $6 + \square = 18$

6 marks

2a. $\square \times 3 = 12$

b. $\square - 9 = 20$

c. $\square + 8 = 31$

d. $24 + 5 = 35 - \square$

e. $18 - 4 = 15 - \square$

f. $6 + \square = 18$

6 marks

3a. Sam has 24 apples but decides to give 9 away. How many apples does he have left?

_____ 2 marks

b. Tom has 16 sweets and decides to share them between him and his

friend. How many sweets does Tom's friend get?

_____ 2 marks

c. A bag of crisps cost 5p. How much would it cost if I bought a bag of crisps every day for 5 days?

_____ 2 marks

d. Sue has 21p and Ben has 16p more. How much money does Ben have?

_____ 2 marks

e. Alison has £32 but spends half in the shops. How much money is she left with?

_____ 2 marks

f. A class of 32 goes to the theatre, but there are only 24 seats. How many more seats are needed?

_____ 2 marks

g. 6 hot dogs cost £1.10. How much would it cost to buy 12 hot dogs?

_____ 2 marks

h. David's alarm clock goes off at 6:45. He sleeps in for 15 minutes. What time does he get up?

_____ 2 marks

i. Joe is 125 cm tall. His younger brother John is 15 cm taller than him.

How tall is John?

_____ 2 marks

Can you put the correct sign in the missing box?

+ **-** **÷** **x**

4a. 23 8 = 15


b. 30 5 = 6

c. 23 7 = 30

d. 7 2 = 14

4 marks

5. Circle all the even numbers.



2 marks

6. Match the words to the figures.

79

five hundred and ninety nine

101

seventy nine

214

one hundred and one

599

two hundred and fourteen

4 marks

7. Finish partitioning these numbers.

$$432 = 400 + \boxed{} + 2$$

$$517 = 500 + 10 + \boxed{}$$

$$112 = \boxed{} + 10 + 2$$

$$509 = 500 + \boxed{} + 9$$

4 marks

8. Complete the sequences.


900ml, 700ml, 500ml, , 100ml

110g 120g 130g , 150g 160g ,

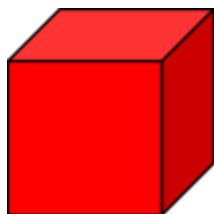
, 1.5kg 2kg 2.5kg , 3.5kg

5 marks

9. Write your answers in the boxes below.



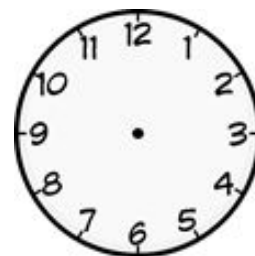
Number of faces



Number of edges

2 marks

10. Samantha goes to bed at 8:30pm.
Draw the hands onto the clock face to show this time.




1 mark

11. Shade the fractions.


A half




Three quarters



One fifth



Two thirds



4 marks

12. Round the numbers to the nearest 10.

a. 11 is nearest to

b. 26 is nearest to

c. 39 is nearest to

d. 99 is nearest to

4 marks

13. Fill in the correct temperature in the empty boxes.

5°C	10°C		20°C	25°C		35°C		45°C	50°C
-----	------	--	------	------	--	------	--	------	------

3 marks

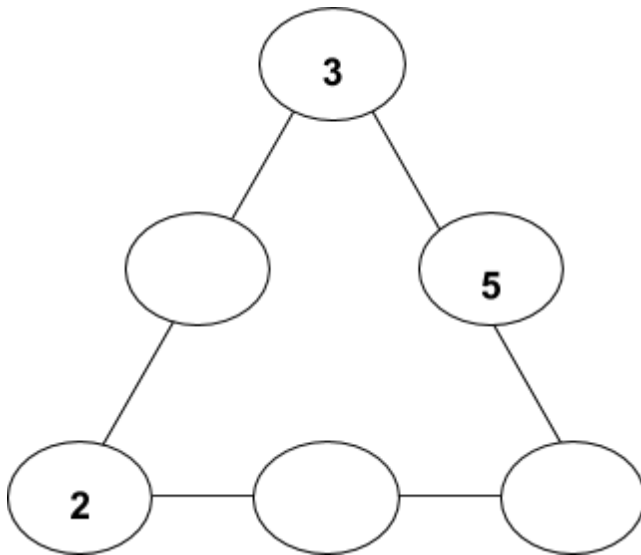
14a. Ben scored 6 goals in his first match. On his second match he scored twice as many goals. How many goals has Ben scored altogether?

goals

b. In four weeks, Ben played 16 games of football. How many games did Ben play in 1 week? _____ games

2 marks

15. Fill the spaces with a number 0-6. All lines should add to 9 and each number should only appear once in the triangle/



3 marks

Mathematics Marking Scheme

Total Marks: 68

- 1a. 11**
- b. 13**
- c. 8**
- d. 45**
- e. 6**
- f. 5**

- 2a. 4**
- b. 29**
- c. 23**
- d. 6**
- e. 1**
- f. 12**

3. One mark awarded for correct answer, one mark awarded for showing working.

- a. 15**
- b. 8**
- c. 25p**
- d. 37p**
- e. £16**
- f. 8**
- g. £2.20**
- h. 7:00**

i. 140cm

4a. -

b. ÷

c. +

d. x

5. 6 and 8

6. One mark awarded per correct answer.

7.

$$432 = 400 + \boxed{30} + 2$$

$$517 = 500 + 10 + \boxed{7}$$

$$112 = \boxed{100} + 10 + 2$$

$$509 = 500 + \boxed{0} + 9$$

8.

900ml, 700ml, 500ml, , 100ml

110g

120g

130g

140g

150g

160g

170g

1kg

1.5kg

2kg

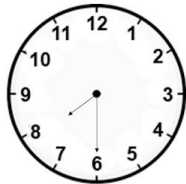
2.5kg

3kg

3.5kg


9. 2 faces
12 edges

10. Half a mark given for correct time, half a mark given for minute hand being smaller than the hour hand.




- 11.


A half



Three quarters



One fifth



Two thirds



- 12a. 10
- b. 30
- c. 40
- d. 100

13.

5°C	10°C	15°C	20°C	25°C	30°C	35°C	40°C	45° C	50°C
-----	------	-------------	------	------	-------------	------	-------------	----------	------

- 14a. 18
- b. 4

15.

