



Maths

Maths Multiple-Choice Test 1

Fill in the following particulars:

Name.....

Boy or girl.....

Date of Birth.....

School.....

Class.....

Today's date.....

Read the following carefully:

- Do not open this booklet or begin the test until you are told to do so.
- Mark your answers on the answer sheet provided.
- Work as carefully and quickly as you can.
- If you can not do a question go on to the next one.
- If you make a mistake, rub out the mistake and write the new answer.
- You will have 50 minutes to complete the test

Sample Paper

Q1	<p>What is $\frac{3}{5}$ as a decimal? Mark your answer on the answer sheet.</p> <hr/> <p>A) 1.5 B) 0.2 C) 0.3 D) 0.6 E) 0.01</p>
Q2	<p>35,621 can be written as $30,000 + 5,000 + 600 + 20 + 1$ What is the value of the 6 in the number 2,654,987? Mark your answer on the answer sheet.</p> <hr/> <p>A) 600 B) 600,000 C) 60 D) 60,000 E) 6</p>
Q3	<p>How do you write 76,012 in words? Mark your answer on the answer sheet.</p> <hr/> <p>A) seventy six thousand and twelve B) seven hundred and sixty thousand and twelve C) seventy thousand and twelve D) seven thousand six hundred and twelve E) sixty thousand and twelve</p>
Q4	<p>Which of the following numbers has the largest value? Mark your answer on the answer sheet.</p> <hr/> <p>A) 5 B) 0.5 C) 5.8 D) 50.1 E) 4.09</p>
Q5	<p>On Monday it was 15° Celsius. If each day of the week is 1 degree warmer than the previous day. What was the temperature on Saturday of that week? Mark your answer on the answer sheet.</p> <hr/> <p>A) 18° B) 20° C) 19° D) 16° E) 17°</p>
Q6	<p>Sally invited her whole class to her birthday party. Sadly, only one quarter (including Sally) of the class attended. There were 6 girls (including Sally) and 4 boys at her party. How many people are in Sally's class? Mark your answer on the answer sheet.</p> <hr/> <p>A) 10 B) 20 C) 40 D) 50 E) 60</p>
Q7	<p>Anne wants to bake a cake. The recipe needs 2.5 dozen eggs. She knows one dozen is 12 eggs. But Anne doesn't know how many eggs are in 2.5 dozen. Do you? Mark your answer on the answer sheet.</p> <hr/> <p>A) 24 B) 25 C) 18 D) 6 E) 30</p>
Q8	<p>A farmer has 432 cows. He sells 55 of them at the local market but then buys 27 sheep. How many animals does he have after his visit to the market? Mark your answer on the answer sheet.</p> <hr/> <p>A) 404 B) 487 C) 350 D) 460 E) 514</p>

Q9 Brian takes his own age, doubles it and then adds 8 to get his dad's age. Brian's dad is 38.
 How old is Brian?
 Mark your answer on the answer sheet.

A) 11 B) 12 C) 13 D) 14 E) 15

Q10 What is 660 divided by 6?
 Mark your answer on the answer sheet.

A) 10 B) 100 C) 110 D) 11 E) 6

Q11 Nicky did a survey on hair colour of all the children in her year. Here are her results.

HAIR COLOUR

blonde ★ ★ ★ ▼

red ▼ ▼ ▼

grey ▼

brunette ★ ★ ★ ★

black ★

★ = 5 children ▼ = 1 child

Which hair colour is the most common in Nicky's year?
 Mark your answer on the answer sheet.

A) blonde B) red C) grey D) brunette E) black

Q12 Which of the following numbers is an even number and also a cube number?
 Mark your answer on the answer sheet.

A) 4 B) 25 C) 64 D) 125 E) 150

Q13 Each square represents 1 square metre.

A

C

B

E

Which shape covers the largest area?
 Mark your answer on the answer sheet.

A) A B) B C) C D) D E) E

Q14 Which one of the following things is most likely to weigh 30 kg?
 Mark your answer on the answer sheet.

A) an apple B) a book C) a car D) a young girl E) an elephant

Q15



How many degrees does the shaded part of the circle represent?
Mark your answer on the answer sheet.

- A) 45° B) 90° C) 180° D) 270° E) 360°

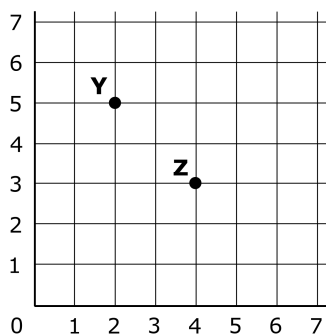
Q16

Jenny has £50 but she has to share it with her sisters. She gives $\frac{2}{5}$ to her older sister Rachel and $\frac{1}{5}$ to her younger sister Susan.

How much does Jenny have left?
Mark your answer on the answer sheet.

- A) £10 B) £20 C) £25 D) £30 E) £45

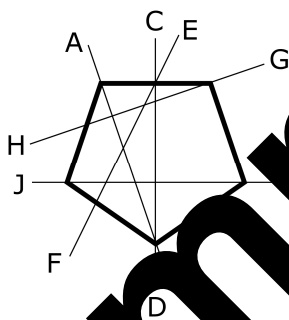
Q17



What are the coordinates of the points Y and Z?
Mark your answer on the answer sheet.

- A) Y(2,5) Z(4,3) B) Y(5,2) Z(3,4) C) Y(2,0) Z(4,3) D) Y(5,2) Z(4,4) E) Y(3,5) Z(2,3)

Q18



Which line is the line of symmetry of this shape?
Mark your answer on the answer sheet.

- A) AB B) CD C) EF D) GH E) IJ

Q19



What is this shape called?
Mark your answer on the answer sheet.

- A) kite B) rhombus C) sphere D) rectangle E) pentagon

Q20 School lunch costs 95p per person each day.
 How much does it cost the Smith family for two boys for the whole week (5 days)?
 Mark your answer on the answer sheet.

A) 19p B) £9.50 C) £4.75 D) £475 E) £5

Q21 Here is a design for a garden pond. The scale is 1cm:1m.

What will the perimeter of the actual pond be?
 Mark your answer on the answer sheet.

A) 120 mm B) 30 cm C) 12 cm D) 12 m E) 52 m

Q22 Here are the heights of six children.

name	height
James	1.2m
Susan	1m
Colin	1.35m
Jenny	1.4m
Matt	1.6m
Lucy	1.15m

What is the range of heights?
 Mark your answer on the answer sheet.

A) 1m B) 1.28m C) 1.35m D) 1.6m E) 1.35m

Q23 In a two week period, it rains 7 days in the first week and 4 days in the second week.
 What proportion of the two weeks was it raining?
 Mark your answer on the answer sheet.

A) $\frac{2}{5}$ B) $\frac{1}{4}$ C) $\frac{4}{7}$ D) $\frac{3}{14}$ E) $\frac{1}{2}$

Q24 One banana costs 30p. Cathy has £1.80.
 How many bananas can she buy?
 Mark your answer on the answer sheet.

A) 2 B) 3 C) 4 D) 5 E) 6

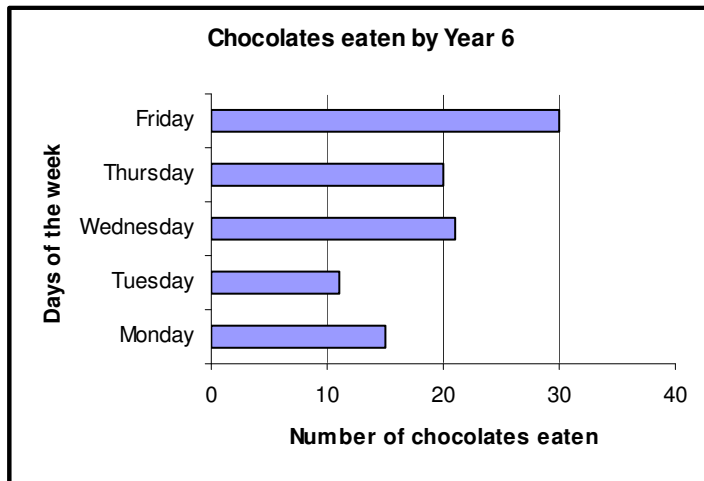
Q25 I had a bag of 250 sweets. I ate $\frac{2}{5}$ of the sweets in just one hour.
 How many do I have left?
 Mark your answer on the answer sheet.

A) 50 B) 200 C) 150 D) 100 E) 25

Q26	<p>$2x + 5x = 8 - x$</p> <p>What is the value of x?</p> <p>Mark your answer on the answer sheet.</p> <hr/> <p>A) 1 B) 2 C) 4 D) 6 E) 8</p>
Q27	<p>Jane takes 1 hour and 45 minutes to do her homework. Kelly takes 3 times as long.</p> <p>How many hours does Kelly take?</p> <p>Mark your answer on the answer sheet.</p> <hr/> <p>A) 3 hours 45 minutes</p> <p>B) 5 hours 15 minutes</p> <p>C) 4 hours 30 minutes</p> <p>D) 5 hours 30 minutes</p> <p>E) 4 hours 45 minutes</p>
Q28	<p>An adult's train ticket to London costs £50. A child's ticket costs $\frac{1}{5}$ of an adult's.</p> <p>How much would it cost for Sarah and her mum to catch the train to London?</p> <p>Mark your answer on the answer sheet.</p> <hr/> <p>A) £60 B) £55 C) £90 D) £100 E) £75</p>
Q29	<p>Two rabbits, Jerry and Spot, decided to see who could eat the most carrots in three hours. After one hour, they had each eaten 4 carrots. Over the next two hours, Jerry ate y carrots per hour and Spot ate z carrots per hour. After three hours, Spot had eaten the most.</p> <p>How would you work out how many more carrots Spot had eaten?</p> <p>Mark your answer on the answer sheet.</p> <hr/> <p>A) $2z - y$ B) $2(z + y)$ C) $2(z - y)$ D) $3(z - y)$ E) $4z - 4y$</p>
Q30	<p>The usual price of a TV is £110 but it is reduced by 25% for a sale. Jeremy has £80.</p> <p>How much more does he need to be able to buy the TV?</p> <p>Mark your answer on the answer sheet.</p> <hr/> <p>A) £20 B) £8 C) £2.50 D) £3.25 E) £10.50</p>
Q31	<p>The school has 2 classes in each year from 1 to 6. There are 23 children in each class.</p> <p>What is the total number of children in the school?</p> <p>Mark your answer on the answer sheet.</p> <hr/> <p>A) 500 B) 138 C) 230 D) 46 E) 276</p>
Q32	<p>Mike has 20 pairs of socks: 4 green, 2 black, 5 white, 8 yellow and 1 red.</p> <p>What is the probability that he picks a pair of black socks?</p> <p>Mark your answer on the answer sheet.</p> <hr/> <p>A) $\frac{1}{10}$ B) $\frac{1}{10}$ C) $\frac{1}{4}$ D) $\frac{8}{20}$ E) $\frac{1}{20}$</p>
Q33	<p>If $2x = y$</p> <p>What is the value of y for $x = 3$?</p> <p>Mark your answer on the answer sheet.</p> <hr/> <p>A) 4 B) 6 C) 1.5 D) 5 E) 8</p>

Q34

This graph shows the number of chocolates eaten by Year 6 on each day of the last week.



How many more chocolates were eaten on Friday than on Monday?
Mark your answer on the answer sheet.

- A) 15 B) 10 C) 45 D) 8 E) 5

Q35

Here are five fractions: $\frac{1}{2}$, $\frac{2}{4}$, $\frac{7}{8}$, $\frac{3}{5}$, $\frac{1}{6}$

Which is the smallest fraction?
Mark your answer on the answer sheet.

- A) $\frac{1}{2}$ B) $\frac{2}{4}$ C) $\frac{7}{8}$ D) $\frac{3}{5}$ E) $\frac{1}{6}$

Q36

Paul is given £3.20 pocket money each week. He spends some of this on food each week, he buys 3 chocolates which cost 30p each and 5 drinks at 20p

How much money does he save in two weeks?
Mark your answer on the answer sheet.

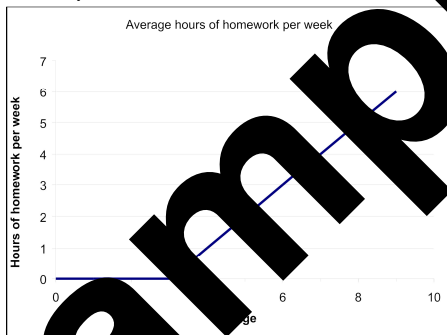
- A) £1.90 B) £3.20 C) £1.30 D) £2.60 E) £6.40

Q37

The graph below shows the average number of hours of homework given to children ages 0 - 9 per week.

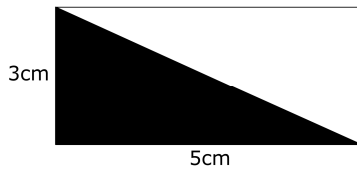
How many hours of homework are given to a 7 year old?

Mark your answer on the answer sheet.



- A) 1 B) 3 C) 4 D) 5 E) 6

Q38



What is the area of the shaded part?
Mark your answer on the answer sheet.

- A) 12cm^2 B) 15cm^2 C) 3cm^2 D) 5cm^2 E) 7.5cm^2

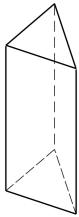
Q39

Five friends measure their heights. The results are: 1.2m 1m 1.55m 1.4m 1.75m

What is the median height?
Mark your answer on the answer sheet.

- A) 1.2m B) 1m C) 1.55m D) 1.4m E) 1.75m

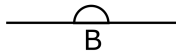
Q40



How many edges does this 3D object have?
Mark your answer on the answer sheet.

- A) 3 B) 6 C) 7 D) 8 E) 9

Q41



How many degrees is angle B?
Mark your answer on the answer sheet.

- A) 45° B) 90° C) 180° D) 270° E) 360°

Q42

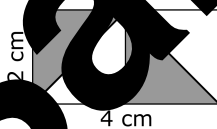
Ten cats catch 3 mice each. Two thirds of the mice are brown and the rest are white.

What is the exact number of white mice?
Mark your answer on the answer sheet.

- A) 10 B) 20 C) 25 D) 30 E) 40

Q43

This rectangle has been divided into 4 equal triangles. The width of the rectangle is 2 cm and the length is 4 cm.



What is the total area of the shaded parts?
Mark your answer on the answer sheet.

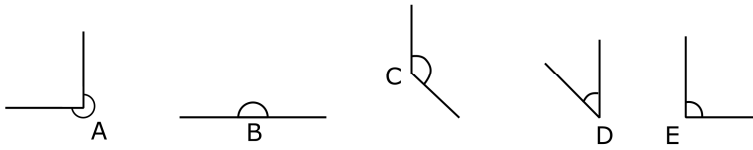
- A) 2cm^2 B) 3cm^2 C) 4cm^2 D) 8cm^2 E) 12cm^2

Q44

What is 0.45 as a percentage?
Mark your answer on the answer sheet.

- A) 45% B) 4.5% C) 0.45% D) 90% E) 450%

Q45



Which of these is an acute angle?
Mark your answer on the answer sheet.

- A) B) C) D) E)

Q46

S H O X L

Which of these letters is NOT the same as itself when rotated 180 degrees?
Mark your answer on the answer sheet.

- A) S B) H C) O D) X E) L


Q47

There were only 6 skipping ropes in the gym and a class of 90 children were for their lesson. So they had to get into groups where each group had one skipping rope.
How many children were in each group?
Mark your answer on the answer sheet.

- A) 90×3 B) $90 \div 6$ C) 90×6 D) $90 + 6$ E) $90 - 6$

Q48

Mary has been blindfolded so you need to give her directions to the square. Beginning where it says 'start' and following the stars until she reaches the square.



- | | | | | |
|--|---|---|---|--|
| <p>A</p> <p>move 2 forward
turn 90° right
move 2 forward
turn 90° left
move 2 forward
turn 90° right
move 4 forward
turn 90° left
move 3 forward</p> | <p>B</p> <p>move 5 forward
turn 90° right
move 2 forward
turn 90° right
move 6 forward
turn 90° right
move 4 forward
turn 90° left
move 3 forward</p> | <p>C</p> <p>move 2 forward
turn 90° left
move 4 forward
turn 90° left
move 6 forward
turn 90° right
move 4 forward
turn 90° left
move 3 forward</p> | <p>D</p> <p>move 4 forward
turn 90° right
move 3 forward
turn 90° right
move 6 forward
turn 90° right
move 3 forward
turn 90° left
move 3 forward</p> | <p>E</p> <p>move 2 forward
turn 90° right
move 3 forward
turn 90° left
move 6 forward
turn 90° right
move 4 forward
turn 90° left
move 3 forward</p> |
|--|---|---|---|--|

Which set of directions will you give her?
Mark your answer on the answer sheet.

- A) A B) B C) C D) D E) E

Q49

63	72	81
72	81	90
81	90	?

What number should replace the question mark?
Mark your answer on the answer sheet.

A) 49

B) 99

C) 110

D) 61

E) 1

Q50

In January a worm was 2.5 cm in length. By December it was 8 cm.

How much had it grown from January to December?
Mark your answer on the answer sheet.

A) 4.5 cm

B) 6.5 cm

C) 5.5 cm

D) 5 cm

E) 8 cm

Sample Paper

Answer Sheet

Maths Multiple-Choice Test 1

Q1	
1.5	<input type="checkbox"/>
0.2	<input type="checkbox"/>
0.3	<input type="checkbox"/>
0.6	<input type="checkbox"/>
0.01	<input type="checkbox"/>

Q2	
600	<input type="checkbox"/>
600,000	<input type="checkbox"/>
60	<input type="checkbox"/>
60,000	<input type="checkbox"/>
6	<input type="checkbox"/>

Q3	
seventy six thousand and twelve	<input type="checkbox"/>
seven hundred and sixty thousand and twelve	<input type="checkbox"/>
seventy thousand and twelve	<input type="checkbox"/>
seven thousand six hundred and twelve	<input type="checkbox"/>
sixty thousand and twelve	<input type="checkbox"/>

Q4	
5	<input type="checkbox"/>
0.5	<input type="checkbox"/>
1.8	<input type="checkbox"/>
50.1	<input type="checkbox"/>
4.09	<input type="checkbox"/>

Q5	
18°	<input type="checkbox"/>
20°	<input type="checkbox"/>
19°	<input type="checkbox"/>
16°	<input type="checkbox"/>
17°	<input type="checkbox"/>

Q6	
10	<input type="checkbox"/>
20	<input type="checkbox"/>
40	<input type="checkbox"/>
50	<input type="checkbox"/>
60	<input type="checkbox"/>

Q7	
24	<input type="checkbox"/>
25	<input type="checkbox"/>
18	<input type="checkbox"/>
6	<input type="checkbox"/>
30	<input type="checkbox"/>

Q8	
404	<input type="checkbox"/>
487	<input type="checkbox"/>
350	<input type="checkbox"/>
460	<input type="checkbox"/>
514	<input type="checkbox"/>

Q9	
12	<input type="checkbox"/>
13	<input type="checkbox"/>
15	<input type="checkbox"/>

Q10	
10	<input type="checkbox"/>
100	<input type="checkbox"/>
110	<input type="checkbox"/>
11	<input type="checkbox"/>
6	<input type="checkbox"/>

Q11	
blonde	<input type="checkbox"/>
red	<input type="checkbox"/>
grey	<input type="checkbox"/>
brunette	<input type="checkbox"/>
black	<input type="checkbox"/>

Q12	
4	<input type="checkbox"/>
25	<input type="checkbox"/>
64	<input type="checkbox"/>
125	<input type="checkbox"/>
150	<input type="checkbox"/>

Q13	
C	<input type="checkbox"/>
D	<input type="checkbox"/>
E	<input type="checkbox"/>

Q14	
an apple	<input type="checkbox"/>
a book	<input type="checkbox"/>
a car	<input type="checkbox"/>
a young girl	<input type="checkbox"/>
an elephant	<input type="checkbox"/>

Q15	
45°	<input type="checkbox"/>
90°	<input type="checkbox"/>
180°	<input type="checkbox"/>
270°	<input type="checkbox"/>
360°	<input type="checkbox"/>

Q16	
£10	<input type="checkbox"/>
£20	<input type="checkbox"/>
£25	<input type="checkbox"/>
£30	<input type="checkbox"/>
£45	<input type="checkbox"/>

Q17	
Y(2,5) Z(4,3)	<input type="checkbox"/>
Y(5,2) Z(3,4)	<input type="checkbox"/>
Y(2,0) Z(4,3)	<input type="checkbox"/>
Y(2,6) Z(4,3)	<input type="checkbox"/>
Y(3,5) Z(4,3)	<input type="checkbox"/>

Q18	
AB	<input type="checkbox"/>
CD	<input type="checkbox"/>
EF	<input type="checkbox"/>
GH	<input type="checkbox"/>
IJ	<input type="checkbox"/>

Q19	
kite	<input type="checkbox"/>
rhombus	<input type="checkbox"/>
sphere	<input type="checkbox"/>
rectangle	<input type="checkbox"/>
pentagon	<input type="checkbox"/>

Q20	
19p	<input type="checkbox"/>
£9.50	<input type="checkbox"/>
£4.75	<input type="checkbox"/>
£475	<input type="checkbox"/>
£5	<input type="checkbox"/>

Q21	
120 mm	<input type="checkbox"/>
30 cm	<input type="checkbox"/>
12 cm	<input type="checkbox"/>
12 m	<input type="checkbox"/>
52	<input type="checkbox"/>

Q22	
1.28m	<input type="checkbox"/>
0.6m	<input type="checkbox"/>
1.6m	<input type="checkbox"/>
1.35m	<input type="checkbox"/>

Q23	
$\frac{2}{5}$	<input type="checkbox"/>
$\frac{1}{4}$	<input type="checkbox"/>
$\frac{4}{7}$	<input type="checkbox"/>
$\frac{3}{14}$	<input type="checkbox"/>
$\frac{1}{2}$	<input type="checkbox"/>

Q24	
2	<input type="checkbox"/>
3	<input type="checkbox"/>
4	<input type="checkbox"/>
5	<input type="checkbox"/>
6	<input type="checkbox"/>

Q25	
50	<input type="checkbox"/>
200	<input type="checkbox"/>
150	<input type="checkbox"/>
100	<input type="checkbox"/>
25	<input type="checkbox"/>

Q26	
3	<input type="checkbox"/>
6	<input type="checkbox"/>
8	<input type="checkbox"/>

Q27	
3 hours 45 minutes	<input type="checkbox"/>
5 hours 15 minutes	<input type="checkbox"/>
4 hours 30 minutes	<input type="checkbox"/>
5 hours 30 minutes	<input type="checkbox"/>
4 hours 45 minutes	<input type="checkbox"/>

Q28	
£60	<input type="checkbox"/>
£55	<input type="checkbox"/>
£90	<input type="checkbox"/>
£120	<input type="checkbox"/>
£75	<input type="checkbox"/>

Q29	
$2z - y$	<input type="checkbox"/>
$2(z + y)$	<input type="checkbox"/>
$2(z - y)$	<input type="checkbox"/>
$3(z - y)$	<input type="checkbox"/>
$4z - 4y$	<input type="checkbox"/>

Q30	
£20	<input type="checkbox"/>
£8	<input type="checkbox"/>
£2.50	<input type="checkbox"/>
£3.25	<input type="checkbox"/>
£10.50	<input type="checkbox"/>

Q31	
500	<input type="checkbox"/>
138	<input type="checkbox"/>
230	<input type="checkbox"/>
46	<input type="checkbox"/>
276	<input type="checkbox"/>

Q32	
$\frac{4}{20}$	<input type="checkbox"/>
$\frac{1}{10}$	<input type="checkbox"/>
$\frac{1}{4}$	<input type="checkbox"/>
$\frac{8}{20}$	<input type="checkbox"/>
$\frac{1}{20}$	<input type="checkbox"/>

Q33	
4	<input type="checkbox"/>
6	<input type="checkbox"/>
1.5	<input type="checkbox"/>
5	<input type="checkbox"/>
8	<input type="checkbox"/>

Q34	
15	<input type="checkbox"/>
10	<input type="checkbox"/>
45	<input type="checkbox"/>
8	<input type="checkbox"/>
5	<input type="checkbox"/>

Q35	
$\frac{1}{2}$	<input type="checkbox"/>
$\frac{2}{4}$	<input type="checkbox"/>
$\frac{7}{8}$	<input type="checkbox"/>
$\frac{3}{5}$	<input type="checkbox"/>
$\frac{1}{6}$	<input type="checkbox"/>

Q36	
£1.90	<input type="checkbox"/>
£3.20	<input type="checkbox"/>
£1.30	<input type="checkbox"/>
£2.60	<input type="checkbox"/>
£6.40	<input type="checkbox"/>

Q37	
2	<input type="checkbox"/>
3	<input type="checkbox"/>
4	<input type="checkbox"/>
5	<input type="checkbox"/>
6	<input type="checkbox"/>

Q38	
12cm ²	<input type="checkbox"/>
15cm ²	<input type="checkbox"/>
3cm ²	<input type="checkbox"/>
5cm ²	<input type="checkbox"/>
7.5cm ²	<input type="checkbox"/>

Q39	
1.2m	<input type="checkbox"/>
1m	<input type="checkbox"/>
1.55m	<input type="checkbox"/>
1.4m	<input type="checkbox"/>
1.75m	<input type="checkbox"/>

Q40	
3	<input type="checkbox"/>
6	<input type="checkbox"/>
7	<input type="checkbox"/>
8	<input type="checkbox"/>
9	<input type="checkbox"/>

Q41	
45°	<input type="checkbox"/>
90°	<input type="checkbox"/>
180°	<input type="checkbox"/>
270°	<input type="checkbox"/>
360°	<input type="checkbox"/>

Q42	
10	<input type="checkbox"/>
20	<input type="checkbox"/>
25	<input type="checkbox"/>
30	<input type="checkbox"/>
40	<input type="checkbox"/>

Q43	
2 cm ²	<input type="checkbox"/>
3 cm ²	<input type="checkbox"/>
4 cm ²	<input type="checkbox"/>
8 cm ²	<input type="checkbox"/>
12 cm ²	<input type="checkbox"/>

Q44	
45%	<input type="checkbox"/>
4.5%	<input type="checkbox"/>
0.45%	<input type="checkbox"/>
90%	<input type="checkbox"/>
450%	<input type="checkbox"/>

Q45	
A	<input type="checkbox"/>
B	<input type="checkbox"/>
C	<input type="checkbox"/>
D	<input type="checkbox"/>
E	<input type="checkbox"/>

Q46	
S	<input type="checkbox"/>
H	<input type="checkbox"/>
O	<input type="checkbox"/>
X	<input type="checkbox"/>
L	<input type="checkbox"/>

Q47	
90 x 3	<input type="checkbox"/>
90 ÷ 6	<input type="checkbox"/>
6 x 90	<input type="checkbox"/>
90 + 6	<input type="checkbox"/>
90 - 6	<input type="checkbox"/>

Q48	
A	<input type="checkbox"/>
B	<input type="checkbox"/>
C	<input type="checkbox"/>
D	<input type="checkbox"/>
E	<input type="checkbox"/>

Q49	
99	<input type="checkbox"/>
10	<input type="checkbox"/>
1	<input type="checkbox"/>

Q50	
4.5 cm	<input type="checkbox"/>
6.5 cm	<input type="checkbox"/>
5.5 cm	<input type="checkbox"/>
5 cm	<input type="checkbox"/>
8 cm	<input type="checkbox"/>

Sample Paper

Answers

Maths Multiple-Choice Test 1

Q1	
1.5	<input type="checkbox"/>
0.2	<input type="checkbox"/>
0.3	<input type="checkbox"/>
0.6	<input checked="" type="checkbox"/>
0.01	<input type="checkbox"/>

Q2	
600	<input type="checkbox"/>
600,000	<input checked="" type="checkbox"/>
60	<input type="checkbox"/>
60,000	<input type="checkbox"/>
6	<input type="checkbox"/>

Q3	
seventy six thousand and twelve	<input checked="" type="checkbox"/>
seven hundred and sixty thousand and twelve	<input type="checkbox"/>
seventy thousand and twelve	<input type="checkbox"/>
seven thousand six hundred and twelve	<input type="checkbox"/>
sixty thousand and twelve	<input type="checkbox"/>

Q4	
5	<input type="checkbox"/>
0.5	<input type="checkbox"/>
1.8	<input type="checkbox"/>
50.1	<input checked="" type="checkbox"/>
4.09	<input type="checkbox"/>

Q5	
18°	<input type="checkbox"/>
20°	<input checked="" type="checkbox"/>
19°	<input type="checkbox"/>
16°	<input type="checkbox"/>
17°	<input type="checkbox"/>

Q6	
10	<input type="checkbox"/>
20	<input type="checkbox"/>
40	<input checked="" type="checkbox"/>
50	<input type="checkbox"/>
60	<input type="checkbox"/>

Q7	
24	<input type="checkbox"/>
25	<input type="checkbox"/>
18	<input type="checkbox"/>
6	<input type="checkbox"/>
30	<input checked="" type="checkbox"/>

Q8	
404	<input checked="" type="checkbox"/>
487	<input type="checkbox"/>
350	<input type="checkbox"/>
460	<input type="checkbox"/>
514	<input type="checkbox"/>

Q9	
11	<input type="checkbox"/>
12	<input type="checkbox"/>
14	<input type="checkbox"/>
15	<input checked="" type="checkbox"/>

Q10	
10	<input type="checkbox"/>
100	<input type="checkbox"/>
110	<input checked="" type="checkbox"/>
11	<input type="checkbox"/>
6	<input type="checkbox"/>

Q11	
blonde	<input type="checkbox"/>
red	<input type="checkbox"/>
grey	<input type="checkbox"/>
brunette	<input checked="" type="checkbox"/>
black	<input type="checkbox"/>

Q12	
4	<input type="checkbox"/>
25	<input type="checkbox"/>
64	<input checked="" type="checkbox"/>
125	<input type="checkbox"/>
150	<input type="checkbox"/>

Q13	
A	<input type="checkbox"/>
B	<input type="checkbox"/>
C	<input type="checkbox"/>
D	<input type="checkbox"/>
E	<input checked="" type="checkbox"/>

Q14	
a kite	<input type="checkbox"/>
a book	<input type="checkbox"/>
a car	<input type="checkbox"/>
a young girl	<input checked="" type="checkbox"/>
an elephant	<input type="checkbox"/>

Q15	
45°	<input type="checkbox"/>
90°	<input type="checkbox"/>
180°	<input type="checkbox"/>
270°	<input checked="" type="checkbox"/>
360°	<input type="checkbox"/>

Q16	
£10	<input type="checkbox"/>
£20	<input checked="" type="checkbox"/>
£25	<input type="checkbox"/>
£30	<input type="checkbox"/>
£45	<input type="checkbox"/>

Q17	
Y(2,5) Z(4,3)	<input checked="" type="checkbox"/>
Y(5,2) Z(3,4)	<input type="checkbox"/>
Y(2,0) Z(4,3)	<input type="checkbox"/>
Y(2,6) Z(4,4)	<input type="checkbox"/>
Y(3,5) Z(2,4)	<input type="checkbox"/>

Q18	
AB	<input type="checkbox"/>
CD	<input checked="" type="checkbox"/>
EF	<input type="checkbox"/>
GH	<input type="checkbox"/>
IJ	<input type="checkbox"/>

Q19	
kite	<input type="checkbox"/>
rhombus	<input type="checkbox"/>
sphere	<input type="checkbox"/>
rectangle	<input type="checkbox"/>
pentagon	<input checked="" type="checkbox"/>

Q20	
19p	<input type="checkbox"/>
£9.50	<input checked="" type="checkbox"/>
£4.75	<input type="checkbox"/>
£475	<input type="checkbox"/>
£5	<input type="checkbox"/>

Q21	
120 mm	<input type="checkbox"/>
30 cm	<input type="checkbox"/>
12 cm	<input type="checkbox"/>
12 m	<input checked="" type="checkbox"/>
52 m	<input type="checkbox"/>

Q22	
1m	<input type="checkbox"/>
10m	<input type="checkbox"/>
0.1m	<input checked="" type="checkbox"/>
1.6m	<input type="checkbox"/>
1.35m	<input type="checkbox"/>

Q23	
$\frac{2}{5}$	<input type="checkbox"/>
$\frac{1}{4}$	<input type="checkbox"/>
$\frac{4}{7}$	<input type="checkbox"/>
$\frac{3}{14}$	<input type="checkbox"/>
$\frac{1}{2}$	<input checked="" type="checkbox"/>

Q24	
2	<input type="checkbox"/>
3	<input type="checkbox"/>
4	<input type="checkbox"/>
5	<input type="checkbox"/>
6	<input checked="" type="checkbox"/>

Q25	
50	<input type="checkbox"/>
200	<input type="checkbox"/>
150	<input checked="" type="checkbox"/>
100	<input type="checkbox"/>
25	<input type="checkbox"/>

Q26	
5	<input type="checkbox"/>
2	<input type="checkbox"/>
1	<input type="checkbox"/>
8	<input type="checkbox"/>

Q27	
3 hours 45 minutes	<input type="checkbox"/>
5 hours 15 minutes	<input checked="" type="checkbox"/>
4 hours 30 minutes	<input type="checkbox"/>
5 hours 30 minutes	<input type="checkbox"/>
4 hours 45 minutes	<input type="checkbox"/>

Q28	
£60	<input type="checkbox"/>
£55	<input type="checkbox"/>
£90	<input checked="" type="checkbox"/>
£120	<input type="checkbox"/>
£75	<input type="checkbox"/>

Q29	
$2z - y$	<input type="checkbox"/>
$2(z + y)$	<input type="checkbox"/>
$2(z - y)$	<input checked="" type="checkbox"/>
$3(z - y)$	<input type="checkbox"/>
$4z - 4y$	<input type="checkbox"/>

Q30	
£20	<input type="checkbox"/>
£8	<input type="checkbox"/>
£2.50	<input checked="" type="checkbox"/>
£3.25	<input type="checkbox"/>
£10.50	<input type="checkbox"/>

Q31	
500	<input type="checkbox"/>
138	<input type="checkbox"/>
230	<input type="checkbox"/>
46	<input type="checkbox"/>
276	<input checked="" type="checkbox"/>

Q32	
$\frac{4}{20}$	<input type="checkbox"/>
$\frac{1}{10}$	<input checked="" type="checkbox"/>
$\frac{1}{4}$	<input type="checkbox"/>
$\frac{8}{20}$	<input type="checkbox"/>
$\frac{1}{20}$	<input type="checkbox"/>

Q33	
4	<input type="checkbox"/>
6	<input checked="" type="checkbox"/>
1.5	<input type="checkbox"/>
5	<input type="checkbox"/>
8	<input type="checkbox"/>

Q34	
15	<input checked="" type="checkbox"/>
10	<input type="checkbox"/>
45	<input type="checkbox"/>
8	<input type="checkbox"/>
5	<input type="checkbox"/>

Q35	
$\frac{1}{2}$	<input type="checkbox"/>
$\frac{2}{4}$	<input type="checkbox"/>
$\frac{7}{8}$	<input type="checkbox"/>
$\frac{3}{5}$	<input type="checkbox"/>
$\frac{1}{6}$	<input checked="" type="checkbox"/>

Q36	
£1.90	<input type="checkbox"/>
£3.20	<input type="checkbox"/>
£1.30	<input type="checkbox"/>
£2.60	<input checked="" type="checkbox"/>
£6.40	<input type="checkbox"/>

Q37	
2	<input type="checkbox"/>
3	<input type="checkbox"/>
4	<input checked="" type="checkbox"/>
5	<input type="checkbox"/>
6	<input type="checkbox"/>

Q38	
12cm ²	<input type="checkbox"/>
15cm ²	<input type="checkbox"/>
3cm ²	<input type="checkbox"/>
5cm ²	<input type="checkbox"/>
7.5cm ²	<input checked="" type="checkbox"/>

Q39	
1.2m	<input type="checkbox"/>
1m	<input type="checkbox"/>
1.55m	<input type="checkbox"/>
1.4m	<input checked="" type="checkbox"/>
1.75m	<input type="checkbox"/>

Q40	
3	<input type="checkbox"/>
6	<input type="checkbox"/>
7	<input type="checkbox"/>
8	<input type="checkbox"/>
9	<input checked="" type="checkbox"/>

Q41	
45°	<input type="checkbox"/>
90°	<input type="checkbox"/>
180°	<input checked="" type="checkbox"/>
270°	<input type="checkbox"/>
360°	<input type="checkbox"/>

Q42	
10	<input checked="" type="checkbox"/>
20	<input type="checkbox"/>
25	<input type="checkbox"/>
30	<input type="checkbox"/>
40	<input type="checkbox"/>

Q43	
2 cm ²	<input type="checkbox"/>
3 cm ²	<input type="checkbox"/>
4 cm ²	<input checked="" type="checkbox"/>
8 cm ²	<input type="checkbox"/>
12 cm ²	<input type="checkbox"/>

Q44	
45%	<input checked="" type="checkbox"/>
4.5%	<input type="checkbox"/>
0.45%	<input type="checkbox"/>
90%	<input type="checkbox"/>
450%	<input type="checkbox"/>

Q45	
A	<input type="checkbox"/>
B	<input type="checkbox"/>
C	<input type="checkbox"/>
D	<input checked="" type="checkbox"/>
E	<input type="checkbox"/>

Q46	
S	<input type="checkbox"/>
H	<input type="checkbox"/>
O	<input type="checkbox"/>
X	<input type="checkbox"/>
L	<input checked="" type="checkbox"/>

Q47	
90 x 3	<input type="checkbox"/>
90 ÷ 6	<input checked="" type="checkbox"/>
6 x 90	<input type="checkbox"/>
90 + 6	<input type="checkbox"/>
90 - 6	<input type="checkbox"/>

Q48	
A	<input type="checkbox"/>
B	<input type="checkbox"/>
C	<input type="checkbox"/>
D	<input type="checkbox"/>
E	<input checked="" type="checkbox"/>

Q49	
49	<input type="checkbox"/>
99	<input checked="" type="checkbox"/>
110	<input type="checkbox"/>
61	<input type="checkbox"/>
1	<input type="checkbox"/>

Q50	
4.5 cm	<input type="checkbox"/>
6.5 cm	<input type="checkbox"/>
5.5 cm	<input checked="" type="checkbox"/>
5 cm	<input type="checkbox"/>
3 cm	<input type="checkbox"/>

Sample Paper