


SENIOR CERTIFICATE EXAMINATION
SENIORSERTIFIKAAT-EKSAMEN



FEBRUARY / MARCH
FEBRUARIE / MAART

2005

TRAVEL AND TOURISM
REIS EN TOERISME

SG

935-2/0

TRAVEL AND TOURISM SG

19 pages
19 bladsye



X05



COPYRIGHT RESERVED / KOPIEREG VOORBEHOU
APPROVED BY UMALUSI / GOEDGEKEUR DEUR UMALUSI



GAUTENGSE DEPARTEMENT VAN ONDERWYS

SENIORSERTIFIKAAT-EKSAMEN

REIS EN TOERISME SG

TYD: 3 uur

PUNTE: 150

INSTRUKSIES:

- Beantwoord AL die vrae.
 - Nommer jou antwoorde korrek.
 - Begin elke nuwe vraag op 'n skoon bladsy in jou antwoordboek.
 - Gebruik die puntetoekenning as lengte-aanduiding van elke verwagte antwoord.
 - Raadpleeg die Bylae wat inligting bevat wat betrekking het op verskeie vrae in hierdie vraestel.
-
-

**AFDELING A
HERROEPING VAN KENNIS****VRAAG 1
ALGEMEEN**

Bestudeer die reisplan, **TEKS A**, in die Bylae en beantwoord die volgende vrae:

- 1.1 Noem die internasionale toeriste-ikone wat die toeriste in Londen en Kaapstad sal kan besigtig. (2)
- 1.2 Beskryf kortliks wat by 'n lugredery se inteken-toonbank (inweegtoonbank) gebeur. (2)
- 1.3 Beskryf kortliks wat by 'n hotel se ontvangstonbank gebeur. (2)
- 1.4 Watter geldeenheid word in Londen gebruik? (1)
- 1.5 Geld Dagligbesparingstyd hierdie tyd van die jaar in Londen? (1)
- 1.6 Word motorhuurtariewe volgens 'n **kalenderdag** of 'n **24-uur periode** bereken? (1)

GAUTENG DEPARTMENT OF EDUCATION

SENIOR CERTIFICATE EXAMINATION

TRAVEL AND TOURISM SG

TIME: 3 hours

MARKS: 150

INSTRUCTIONS:

- Answer ALL the questions.
 - Number your answers correctly.
 - Start each new question on a new page in your answer book.
 - Use the mark allocation as a guide to the length of each expected answer.
 - Consult the Annexure, which contains information relevant to various questions in this paper.
-
-

SECTION A
RECALL OF LEARNED KNOWLEDGE**QUESTION 1**
GENERAL

Study the tour itinerary, **Text A** in the Annexure and answer the following questions:

- 1.1 Name the international tourist icons the tourists will be able to see in London and Cape Town. (2)
- 1.2 Briefly describe what happens at an airline check-in counter. (2)
- 1.3 Briefly describe what happens at a hotel check-in counter. (2)
- 1.4 What currency is used in London? (1)
- 1.5 At this time of year, will Daylight Savings Time be in operation in London? (1)
- 1.6 Are car rental rates calculated according to a **calendar day** or a **24-hour day**? (1)

- 1.7 Die toeriste sal per see vanaf Kaapstad na Durban reis en sal 'n aantal bekende toeriste-aantreklikhede aan die Kaapse suidkus nie kan besoek nie. Kies uit die onderstaande lys die VYF besienswaardighede langs of naby aan die suidkus tussen Kaapstad en Durban wat hulle sal misloop. (5)

St. Luciameer
Die Walvisroete
Kango-grotte
Nasionale Krugerwildtuin
Addo Nasionale Olifantpark
Gold Reef City
Die Tuinroete
Volstruisplase
Sun City

- 1.8 Noem die Wêreld Erfenisterrein naby Kaapstad wat deur die toeriste besoek kan word wanneer hulle in die omgewing is. (1)
- 1.9 Noem 'n Wêreld Erfenisterrein naby Johannesburg wat deur die toeriste besoek kan word op hul pad na of vanaf Sun City. (1)

[16]

VRAAG 2 STREEKTOERISME-AFSETGEBIEDE

- 2.1 Pas die **SAOG-lande** in **Kolom A** by die geldeenheid in Kolom B. Skryf in jou antwoordboek slegs die korrekte letter langs die vraagnommer neer, bv. 2.1.7 I.

KOLOM A SAOG-LAND	KOLOM B GELDEENHEID
2.1.1 Botswana	A Dollar
2.1.2 Swaziland	B Kwacha
2.1.3 Zimbabwe	C Loti
2.1.4 Lesotho	D Metical
2.1.5 Zambië	E Lilangeni
2.1.6 Mosambiek	F Pond
	G Sjieling
	H Pula

(6)
[6]

- 1.7 The tourists will travel by sea from Cape Town to Durban, and miss out on a number of very famous tourist attractions along or near the Cape south coast. From the list below, select the FIVE attractions situated on or near the South coast, between Cape Town and Durban, they will not see. (5)

Lake St. Lucia
The Whale Route
The Cango Caves
Kruger National Park
Addo Elephant National Park
Gold Reef City
The Garden Route
The Ostrich Farms
Sun City

- 1.8 Name a World Heritage Site near Cape Town which the tourists can visit while they are in that area. (1)
- 1.9 Name a World Heritage Site near Johannesburg, which the tourists could visit either on their way to or from Sun City. (1)

[16]

QUESTION 2
REGIONAL TOURIST MARKETS

- 2.1 Match the **SADC country** in **Column A** with the **currency** in **Column B**. In your answer book, write down only the question number and the correct letter next to it, e.g. 2.1.7 I.

COLUMN A SADC COUNTRY	COLUMN B CURRENCY
2.1.1 Botswana	A Dollar
2.1.2 Swaziland	B Kwacha
2.1.3 Zimbabwe	C Loti
2.1.4 Lesotho	D Metical
2.1.5 Zambia	E Lilangeni
2.1.6 Mozambique	F Pound
	G Shilling
	H Pula

[6]

VRAAG 3
INTERNASIONALE TOERISTEBESTEMMINGS EN EKOTOERISME

- 3.1 Pas die **Internasionale Toeristebestemming** in **Kolom A** by die korrekte **beskrywing** in **Kolom B**. Skryf slegs die vraagnommers onder mekaar in jou antwoordboek neer en die letter uit Kolom B daarnaas, bv. 3.1.9 M.

KOLOM A INTERNASIONALE BESTEMMINGS	KOLOM B BESKRYWING
3.1.1 Venisië	A Gewilde bestemming vir passasierskepe – sonnig en warm gedurende die winter, wanneer Europa en Amerika yskoud is.
3.1.2 Die Alpe	B Die Pous woon hier. St. Peterskatedraal en die sistynse kapel is ook hier geleë.
3.1.3 Die Karibiese Eilande	C Europa se speelgrond vir wintersport. Gedurende die somer is dit gewild vir voetslaan, bergklim en ander avontuuraktiwiteite.
	D Die kuslyn in die suide van Frankryk en die weste van Italië, aan die strande van die Middelandse See.
	E Bekend vir sy kanale, gondolas, kunsgallerye en kerke.

(3)

- 3.2 Pas die **Ekotoerisme Definisie** in **Kolom A** by die korrekte beskrywing in **Kolom B**. Skryf slegs die vraagnommers onder mekaar in jou antwoordboek neer en die letter uit **Kolom B** daarnaas, bv. 3.1.9. M.

KOLOM A EKOTOERISME DEFINISIE	KOLOM B BESKRYWING
3.2.1 Gasheergemeenskap	A Die skade wat aan die omgewing gedoen word deur giftige afvalprodukte.
3.2.2 Ekotoerisme	B Die plaaslike inwoners wat naby aan of in 'n ekotoeriste-aantreklikheid woon wat deelneem in die aantreklikheid.
3.2.3 Volhouding	C Om na ongerepte natuurgebiede te reis met die doel om die natuurlike skoonheid, fauna en flora asook die inheemse kulture te ervaar.
3.2.4 Besoedeling	D 'n Uitgestorwe spesie.
3.2.5 Bedreigde spesies	E Om die omgewing en alles daarin so te versorg dat ons kinders en hulle kinders dit ook nog kan waardeer.
	F Om te reis na gebiede met asemrowende natuurskoon en geskiedenis, met die doel om die kuns en kultuur van die plaaslike bevolking te ervaar.
	G Dié spesie sal uitsterf indien dit nie bewaar word nie.

(8)

TOTAAL VIR AFDELING A: [30]

QUESTION 3
INTERNATIONAL TOURIST DESTINATIONS AND ECOTOURISM

- 3.1 Match the **International Tourist Destination** in **Column A** with its correct **description** in **Column B**. In your answer book, write down the question numbers and the letter from Column B, e.g. 3.1.9 M.

COLUMN A INTERNATIONAL TOURIST DESTINATIONS	COLUMN B DESCRIPTION
3.1.1 Venice	A Popular destination for cruise ships – sunny and warm in winter, when Europe and America are freezing.
3.1.2 The Alps	B Where the Pope lives. St. Peter’s Cathedral and the Sistine Chapel are situated here.
3.1.3 The Caribbean	C Europe’s winter-sports playground. In summer it is popular for hiking, climbing and adventure activities.
	D The coast of southern France and western Italy, along the shores of the Mediterranean Sea.
	E Famous for canals, gondolas, art galleries & churches.

(3)

- 3.2 Match the **Ecotourism Term** in **Column A** with its correct description in **Column B**. In your answer book write down the question numbers and the letter from **Column B** e.g. 3.1.9 M.

COLUMN A ECOTOURISM TERM	COLUMN B DESCRIPTION
3.2.1 Host community	A The damage done to the environment by poisonous waste products
3.2.2 Ecotourism	B The local inhabitants who live in or near an ecotourist attraction and who are stakeholders in the attraction
3.2.3 Sustainability	C Travelling to unspoiled areas to experience the natural beauty, fauna & flora and the indigenous culture
3.2.4 Pollution	D An extinct species
3.2.5 Endangered species	E Taking care of the environment and everything in it so that our children and their children may enjoy it
	F Travelling to areas of great beauty and history to share the arts and culture of the local people
	G Unless the species is conserved, it will become extinct

(5)

TOTAL FOR SECTION A: [30]

AFDELING B
DEEL EEN – TOEPASSING VAN VAARDIGHEDE

VRAAG 4
REISBEGROTINGS EN BASIESE REISPLANNE

- 4.1 Gebruik die Reisplan **Teks A** en die inligting in **Teks B** en bereken die koste van die toeriste se akkommodasie in Kaapstad. (2)
- 4.2 Gebruik die inligting in **Teks C** en bereken die koste vir die toeriste se gehuurde motor in Durban, indien hulle 'n Ford Fiësta kies met CDW, Beskerming teen Diefstal en PAI en 'n totale afstand van 600 km aflê. (Ignoreer kontrakfooie, naweekpakket, toerisme-heffings, afleweringfooie, ens.) (8)
- 4.3 Gebruik die inligting in **Teks D**. Teken die reisplan in jou antwoordboek oor. Maak gebruik van die tabel en stel 'n basiese reisplan vir die toeriste saam gedurende hul verblyf in Kaapstad op dag 5, 6 en 7. Kies toepaslike halfdag- en voldagtoere, soos op die reisplan aangedui en uit die betrokke inligting. Wys die berekeninge en totale onkoste van die toere.

Dag	Oggendaktiwiteit	Middagaktiwiteit	Akkommodasie

(10)
[20]

VRAAG 5
TYDROOSTERS EN TOERISTE-KAARTE

- 5.1 Bestudeer die Reisplan, **Teks A** en **Teks E** en beantwoord die volgende vrae.
- 5.1.1 Wat sal die toeriste se vertrek- en aankomstye op hul suidwaartse vlug vanaf Londen wees? (2)
- 5.1.2 Wat sal die toeriste se vertrek- en aankomstye op hul noordwaartse vlug na Londen wees? (2)
- 5.1.3 Wat is die vlugtyd vanaf Johannesburg na Londen op vlug SA 234? (2)
- 5.2 Bestudeer die kaart, **Teks F** voordat jy die volgende vraag beantwoord.
- 5.2.1 Waar is die mees noordelike plek op die kaart waar die toeriste vir inligting kan vra? (Noem die toeriste-aantreklikheid waar dit geleë is.) (1)
- 5.2.2 Watter hotel is die naaste aan die mees suidelike posisie op die kaart waar die toeriste vir inligting kan vra? (1)
- 5.2.3 Wat is die naam van die akwarium op die kaart? (1)
- 5.2.4 Noem TWEE hotelle op die Victoria & Alfred Waterfront. (2)

[11]

SECTION B
PART ONE: APPLICATION OF SKILLS

QUESTION 4
TOUR BUDGETS & BASIC ITINERARIES

4.1 Use the Tour Itinerary in **Text A** and the information in **Text B**.
Calculate the cost of the tourists' accommodation in Cape Town. (2)

4.2 Use the information in **Text C**.
Calculate the cost of the tourists' rented car in Durban if they rent a Ford Fiësta, take out CDW, Theft Protection and PAI and drive a total of 600 kms. (Ignore Weekender Rates, Contract Fees, Tourism Levy, Delivery Fees, etc.) (8)

4.3 Use the information in **Text D**.
Copy the Tour Planner, below, into your answer book. By using the table, compile a basic tour plan for the tourists during their stay in Cape Town on days 5, 6 and 7. Choose appropriate half-day and full day tours, as indicated on the Tour Itinerary and, from the information provided. Show the calculations and the total cost of the tours for your two tourists.

Day	Morning Activity	Afternoon Activity	Accommodation

(10)
[20]

QUESTION 5
TIMETABLES and TOURIST MAPS

5.1 Refer to the Tour Itinerary, **Text A** and **Text E** to answer the following questions.

5.1.1 What will the tourists' departure and arrival times be on their southbound flight from London? (2)

5.1.2 What will the tourists' departure and arrival times be on their northbound flight to London? (2)

5.1.3 What is the flying time from Johannesburg to London on flight SA 234? (2)

5.2 Study the map, **Text F** before answering the following questions.

5.2.1 Where is the most northerly place on the map where tourists can go for information? (Name the attraction in which it is situated.) (1)

5.2.2 What hotel is nearest to the most southerly place on the map where tourists can go for information? (1)

5.2.3 What is the name of the aquarium shown on the map? (1)

5.2.4 Name TWO hotels situated on the Victoria & Alfred Waterfront. (2)
[11]

VRAAG 6 EKOTOERISME

- 6.1 Lees die onderstaande artikel, geneem uit die **GSA**, en beantwoord die daaropvolgende vrae:

Ezulwini Lodges

'Ezulwini' beteken 'Paradys' in Zoeloe. Dit is 'n plek waar Afrika ongerep bly en waar die siklusse van die lewe voortgaan net soos aan die begin van alle tye.

Die Ezulwini Lodges is in die Balule-gedeelte van die wêreldberoemde Nasionale Krugerwildtuin geleë. Albei is in wonderlike afgesonderde plekke; een op die oewer van die magtige Olifantsrivier en die ander op 'n koppie wat oor die Bosveld uitkyk.

Akkommodasie bestaan uit grasdak-chalets met twee enkelbeddens, en-suite fasiliteite, elektrisiteit, insekbestaande skerms, oorhoofse waaiers, mini-kroeë en tee en koffie. Skotteltelevisie en telefoon- en faksfasiliteite is ook beskikbaar en die water is drinkbaar.

By Ezulwini word vriendelikheid en informaliteit beklemtoon. U persoonlike wildbewaarder sal sy kennis van die bos en diere gedurende wildbesigtigingstoere op 'n oop safarivoertuig met u deel. Hierdie besigtigingstoere vind vroeg soggens en laatmiddag plaas. In die laatmiddag sal hy u voorstel aan die wêreld van allerlei nagdiere en sodra die son agter die Drakensberg verdwyn, sal hy stop vir skemerkelkies onder die sterrehemel.

Saans, wanneer u in die boma om die kampvuur sit en die uitmuntende Afrika-disse geniet, is dit nie onmoontlik om die gebrul van 'n leeu, gevolg deur 'n koor van hiënas en jakkalse in die agtergrond te hoor nie. Een van die mees spannende staptogte is sekerlik deur gebiede waar leeus voorkom. Hier bestaan die ekosisteem uit plantegroei soos grasvelde en doringbosse. Gaste sal hier ook nader aan die natuur se kleiner diertjies, voëls en ander boomsoorte kan kom.

Terug by die kamp, lok die koel water van die swembad voordat u u gereed maak om in 'n sjarmante en tipiese Afrika-chalet te gaan slaap.

Kom na Ezulwini – die paradys – en keer terug met 'n Afrika-belewenis wat altyd by u sal bly.

- 6.1.1 Watter woord in paragraaf een is 'n sleutelwoord in die definisie van ekotoerisme? (1)
- 6.1.2 Hoe verwag jy dat **Afrika-disse** voorberei word? (2)
- 6.1.3 Watter lid van die Groot Vyf word in die artikel genoem? (1)
- 6.1.4 Noem die ander lede van die Groot Vyf. (4)
- 6.1.5 Waarom word wildbesigtigingstoere gewoonlik vroeg in die oggend of laatmiddag onderneem? (2)
- 6.1.6 Watter TWEE provinsies in Suid-Afrika deel die Nasionale Krugerwildtuin? (2)
- 6.1.7 Waaruit bestaan 'n **ekosisteem**? (3)
- 6.1.8 Beskryf kortliks die diensvoorwaardes en pligte van 'n wildbewaarder; ook bekend as 'n veldwagter. (3)

[18]

QUESTION 6
ECOTOURISM

6.1 Read the extract below from the **GSA** then answer the questions that follow.

Ezulwini Lodges

In the Zulu language, 'Ezulwini' means 'Paradise'. In this place, Africa has remained unspoiled and the cycles of life continue as they had since time began.

The Ezulwini Lodges are situated in the Balule section of the famous Kruger National Park. Both are in gloriously secluded locations, one against the banks of the mighty Olifants River and the other on a hillside overlooking the Bushveld.

Accommodation is in thatched chalets with twin beds, en-suite bathroom and electricity, insect-proof screens, overhead fans, mini-bars and a tea/coffee tray. Satellite TV and telephone/fax are available - and you can drink the water.

At Ezulwini the emphasis is on friendliness and informality. Your personal game ranger shares his experiences of the bush and the animals during game drives in an open safari vehicle, usually in the early morning or late afternoon. At dusk he'll invite guests into the world of the nocturnal creatures, stopping for sundowners as the sun sinks behind the Drakensberg Mountains.

In the evening, while sitting around the campfire in the boma, enjoying superb meals cooked the African way, guests may hear the lions roar while the hyenas and jackals join in the chorus. One of the most thrilling walks is through lion country, an ecosystem where the vegetation is typically composed of long grass and thorn bushes. Here one walks among the birds and the trees, where guests get closer than they could ever imagine to nature's smaller creatures.

Back at camp, the swimming pool invites you to cool down before retiring to your charming African chalet.

Come to Ezulwini – the paradise – and leave with an experience of Africa that you'll remember forever.

- 6.1.1 What word in paragraph one is a key word in the definition of ecotourism? (1)
- 6.1.2 How would you expect **meals cooked the African way** to be prepared? (2)
- 6.1.3 What member of the Big Five is mentioned in the article? (1)
- 6.1.4 Name the other members of the Big Five. (4)
- 6.1.5 Why are game drives usually undertaken in the early morning and late afternoon? (2)
- 6.1.6 What TWO provinces in South Africa share the Kruger National Park? (2)
- 6.1.7 Of what does an **ecosystem** consist? (3)
- 6.1.8 Briefly describe the working conditions and duties of a game ranger, also known as a field guide. (3)

[18]

VRAAG 7
 Globale Perspektiewe en Uitmuntende Diens

- 7.1 Kies enige TWEE van die volgende internasionale toerismebestemmings en skryf 'n paragraaf van ongeveer 50 woorde oor elkeen. Verduidelik ook waarom dit so gewild is as toeristebestemmings.
- 7.1.1 Disney World (Orlando)
7.1.2 Die Riviera
7.1.3 Vatikaanstad 2 x 3 = (6)
- 7.2 Bestudeer die kaart van Afrika, **Teks G** en identifiseer die volgende lande gemerk 7.2.1; 7.2.2; 7.2.3; 7.2.4; 7.2.5 en 7.2.6. (6)
- 7.3 Lees die onderstaande artikel, aangehaal uit die "**GSA**" en beantwoord die daaropvolgende vrae.

Le Saint Geran, Mauritius, Hotel van die Jaar 2002

Le Saint Geran, die luukse vlagskip van Sun Internasionaal in Mauritius, is deur lesers van die Brits gebaseerde tydskrif, **Tatler** gekies as "Hotel van die Jaar".

Victoria Mather, reisredakteur van die **Tatler**, wat verantwoordelik was vir die **2002 Tatler se Gids van die Wêreld se 101 Hotelle**, het glo gesê dat goeie diens en nogmaals goeie diens hierdie hotel die hotel van die jaar gemaak het. Daar is selfs 'n man in 'n wit kortbroek wat die gaste se sonbrille op die strand skoonmaak!

Hierdie vyfster-hotel is alles waarvan 'n mens slegs kan droom. Le Saint Geran is geleë tussen 5000 palmbome op 'n 60-akker skiereiland en bevat 'n asemrowende mooi privaatstrand van ongeveer 2 km lank, en het 'n lagune aan die een kant en die Indiese Oseaan aan die ander. Die hotel is 'n lid van die 'Leading Hotels of the World'-organisasie en is bekend vir sy veilige ligging, asook vir uitstekende diens, informele atmosfeer en die aandag wat aan elke klein detail gegee word.

Personeel is altyd byderhand om elke gier te bevredig; of u op die strand ontspan, 'n aptytwekkertjie geniet, by die Givenschy spa gepamperlang word of 'n middagslapie in u persoonlike suite neem. Driester Michelin chef, Alain Ducasse is verantwoordelik vir die heerlike gourmetdisse wat in die "Spoon des Isle" opgetower word. Daar is ook 'n 24-uur kamerdiens beskikbaar wat alles op die restaurant se spyskaart kan voorsien aan diegene wat verkies om hulle maaltye in privaatheid te geniet.

Le Saint Geran is die enigste hotel ter wêreld wat aan hul gaste 'n glasie sjampagne bedien wanneer hulle vertrek – sekerlik sodat u die genoeglike skok van u hotelrekening beter sal kan hanteer! Vanselfsprekend sal sulke luuksheid en bederf nie goedkoop verkwansel word nie. Maar Le Saint Geran is elke sent werd, omdat u kan ontspan met die wete dat enigiets onder die son aan u voorsien sal word.

Tesame met die ongelooflike watersport en al die ander ontspanningsfasiliteite, is daar ook 'n 9-putjie golfbaan wat deur ons eie Gary Player ontwerp is; asook 'n ten volle toegeruste gimnasium.

- 7.3.1 Watter besondere aspek van goeie diens word deur Victoria Mather as ongewoon en indrukwekkend beskou? (1)
- 7.3.2 Beskryf kortliks wat bedoel word met **kamerdiens** in 'n hotel. (3)
- 7.3.3 Beskryf kortliks TWEE aspekte van uitmuntende diens wat ooglopend met groot sorg deur die bestuur van Le Saint Geran toegepas word. (2)

[18]

QUESTION 7
GLOBAL PERSPECTIVES & SERVICE EXCELLENCE

- 7.1 Select any TWO of the following international tourist destinations and write a paragraph of approximately 50 words on each. Clearly state why they are such popular tourist destinations.
- 7.1.1 Disney World (Orlando)
7.1.2 The Riviera
7.1.3 Vatican City 2 x 3 = (6)
- 7.2 Study the map of Africa, **Text G** and identify the following countries, marked 7.2.1; 7.2.2; 7.2.3; 7.2.4; 7.2.5 and 7.2.6. (6)
- 7.3 Read the extract from the **GSA** below, then answer the questions that follow.

Le Saint Geran, Mauritius' Hotel of the Year 2002

Le Saint Geran, the luxurious flagship of Sun International in Mauritius, has been awarded 'Hotel of the Year' status by readers of UK based **Tatler** magazine.

Victoria Mather, Travel Editor of **Tatler**, who compiled the **2002 Tatler's guide to the World's Best 101 Hotels**, was quoted as saying, "The service, the service and the service, makes this my hotel of the year. There's even a man in white shorts who cleans your sunglasses on the beach!"

This 5-star hotel is what dreams are made of. Set among 5000 coconut palms on a 60-acre peninsula, Le Saint Geran has 2 km of breathtakingly beautiful private beach, with a lagoon to one side and the Indian Ocean on the other. A member of the 'Leading Hotels of the World' organization, Le Saint Geran is known for its safe location, attention to detail and outstanding service, as well as its informal atmosphere.

Staff are on hand to cater to your every whim, whether you are relaxing on the beach, sipping a cocktail, being pampered at the award-winning Givenchy spa, or taking a siesta in your personal suite. Three-star Michelin chef, Alain Ducasse, whips up the delicious gourmet dishes in the 'Spoon des Isle' restaurant. There is 24-hour room service, offering everything on the restaurant menu, for those who prefer to dine in private.

Le Saint Geran is the only hotel in the world to give their guests a glass of champagne when they're departing – to get you over the delightful shock of the bill. Obviously, such luxury and attention does not come cheaply. But every cent spent at Le Saint Geran is worth it, as you relax, totally secure in the knowledge that anything you could wish for, will be provided.

Along with its amazing watersports and other recreational facilities, there is a 9-hole golf course designed by Gary Player and a fully equipped gymnasium.

- 7.3.1 What particular aspect of the service did Victoria Mather consider unusual and impressive? (1)
- 7.3.2 Describe briefly what **room service** in a hotel is. (3)
- 7.3.3 Describe briefly TWO aspects of service excellence which the management of Le Saint Geran have obviously taken great care to put into practice. (2)

[18]

VRAAG 8
WISSELKOERS EN TEGNOLOGIE

- 8.1 Raadpleeg die onderstaande tabel en beantwoord die daaropvolgende vrae. **Berekeninge moet getoon word.** Antwoorde moet tot twee desimale plekke afgerond word. Alle geldeenhede moet duidelik getoon word.

GELDEENHEID	WAARDE IN S.A. RAND
VSA Dollar	7.75
Britse Pond	10.45
Euro	8.12
Japanese Yen	0.04

- 8.1.1 'n Hamburger en skyfies kos R18.50 in Suid-Afrika. Bereken wat dieselfde ete in VSA Dollar sal kos. (2)
- 8.1.2 In England kos B&B verblyf £15.25 per nag, per persoon wat deel. Bereken die koste in S.A. Rand. (2)
- 8.1.3 'n Botteltjie parfuum kos in Suid-Afrika R190,82. Bereken die ekwivalente koste in die Franse geldeenheid. (2)
- 8.1.4 Die prys van bief-fillet is baie hoog in Japan en kos ¥5750 per kilogram. Bereken die gelykwaardige koste in S.A. Rands. (2)
- 8.2 Beskryf kortliks die verskil tussen 'n **Globale Verspreidingsstelsel** en 'n **Sentrale Besprekingsstelsel**. (3)
- 8.3 Noem TWEE Globale Verspreidingsstelsels. (2)
- 8.4 Noem TWEE Sentrale Besprekingsstelsels. (2)
- [15]**

VRAAG 9
TYDSONES

- 9.1 Bestudeer die tydsonekaart, **Teks H** in die Bylae en beantwoord die volgende vrae. Toon al jou **berekeninge**.
- 9.1.1 'n Sakeman reis vanaf Suid-Afrika na New York. Hy moet 'n vergadering om 09:00 op Vrydag, 5 Junie bywoon. Hy het 'n keuse van twee vlugte. Vlug SA 201 verlaat Johannesburg op 20:00 op Donderdag, 4 Junie en vlug BA45 verlaat Johannesburg om 22:00 op Donderdag, 4 Junie. Die vlugtyd is 17 ure. Watter vlug behoort hy te neem? Gee volledig redes waarom hy dié betrokke vlug behoort te neem. (3)
- 9.1.2 Dit is sesuur in die oggend op 14 Julie in Hong Kong. Hoe laat is dit en wat is die datum in New York? (3)

QUESTION 8
CURRENCY CONVERSION AND TECHNOLOGY

- 8.1 Using the table below, answer the following questions. **Show all your calculations.** Answers must be rounded off to two decimal places. All currencies must be clearly indicated.

CURRENCY	VALUE IN S.A. RANDS
U.S. Dollar	7.75
U.K. Pound	10.45
Euro	8.12
Japanese Yen	0.04

- 8.1.1 The cost of a hamburger and chips in South Africa is R18.50. Calculate the equivalent cost in U.S. Dollars for the same meal. (2)
- 8.1.2 In England, a one night stay at a B&B is £15.25 p.p. sharing. Calculate the equivalent cost in S.A. Rands. (2)
- 8.1.3 A bottle of perfume costs R190,82 in South Africa. Calculate the equivalent cost in the French currency. (2)
- 8.1.4 The price of beef fillet in Japan is very expensive and costs ¥5750 per kilogram. Calculate the equivalent cost in S.A. Rands. (2)
- 8.2 Briefly describe the difference between a **Global Distribution System** and a **Central Reservation System**. (3)
- 8.3 Name TWO Global Distribution Systems. (2)
- 8.4 Name TWO Central Reservation Systems. (2)
- [15]

QUESTION 9
TIME ZONES

- 9.1 Refer to the Time Zone map, **Text H** in the Annexure and answer the questions that follow.
Show all your calculations.
- 9.1.1 A businessman is travelling from South Africa to New York. He has to attend a meeting at 09:00 on Friday, 5 June. He has a choice of two flights. Flight SA 201 leaves Johannesburg at 20:00 on Thursday, 4 June and flight BA45 leaves Johannesburg at 22:00 on Thursday, 4 June. The flying time is 17 hours. Which flight should he take? Give full reasons why he should take that particular flight. (3)
- 9.1.2 It is six o'clock in the morning on 14 July in Hong Kong. What is the time and date in New York? (3)

9.1.3 Vlug SA 234 het Johannesburg om 21:00 op 14 Februarie verlaat en na 'n ononderbroke vlug om 08:00 op 15 Februarie in Londen geland. Wat was die vliegtyd?

(2)
[8]

DEEL TWEE – INTERPRETASIE VAN INLIGTING

VRAAG 10

10.1 Lees die inligting in **Teks C** sorgvuldig deur en sê of die volgende stellings WAAR of ONWAAR is en gee 'n rede vir jou antwoord.

10.1.1 Indien ek 'n Ford Fiësta met CDW huur en ek is in 'n ongeluk betrokke wat herstelkoste van R5400 beloop, betaal ek geen ekstra kostes nie. (2)

10.1.2 Daar is geen spesiale naweektarief gekoppel aan 'n VW-bussie nie. (2)

10.1.3 Die tarief sluit petrol in. (2)

10.1.4 Die 7+ dae verlengde huurtarief sluit 'n totaal van 150 km in. (2)

10.1.5 Hierdie tarief sluit nie BWT teen 14% in nie. (2)

10.1.6 Die Toyota Conquest het geen lugverkoeling nie. (2)

10.2 Lees die inligting in **Teks B** sorgvuldig deur en sê of die volgende stellings WAAR of ONWAAR is en gee 'n rede vir jou antwoord.

10.2.1 Om te kwalifiseer vir die 'Sunbreak' – tariewe moet ek ten minste drie aande in 'n hotel oornag. (2)

10.2.2 Ek kwalifiseer nie vir die spesiale 'Sunbreak'-tarief op 'n Woensdag, Donderdag- en Vrydagaand as ek in die Breakers B & B tuisgaan nie. (2)

10.2.3 Indien my 12-jarige kind 'n kamer met my en my eggenoot in die Cabana Beach Hotel deel, is haar verblyf gratis as ek van die 'Sunbreaks'-aanbod gebruik maak. (2)

10.2.4 Wanneer twee persone 'n kamer in die Beverley Hills Sun deel, betaal hulle dieselfde as wanneer een persoon alleen die kamer beset. (2)

10.2.5 Die Sunbreaks'-tariewe by die Cullinan Hotel op die V & A Waterfront in Kaapstad is slegs op Vrydag-, Saterdag- en Sondagaande beskikbaar. (2)

10.2.6 Indien ek en my sokkerspan in die Riverside Sun bespreek, kwalifiseer ons vir die spesiale 'Sunbreak' –tariewe. (2)

10.2.7 Tariewe sluit heffing van 1% uit. (2)

9.1.3 Flight SA 234 took off from Johannesburg at 21:00 on 14 February and after a non-stop flight, landed in London at 08:00 on 15 February. What was the flying time?

(2)
[8]

PART TWO: INTERPRETATION OF INFORMATION

QUESTION 10

10.1 Carefully read the information in **Text C** and say whether the following statements are TRUE or FALSE and give a reason for your answer.

10.1.1 If I rent a Ford Fiësta with CDW and I am involved in an accident resulting in repairs amounting to R5400, I pay no additional charge. (2)

10.1.2 There is no special weekend rate for the VW Microbus. (2)

10.1.3 The rates quoted include petrol (fuel). (2)

10.1.4 The 7+ days Extended Rental rates include a total of 150 free kms. (2)

10.1.5 These rates do not include VAT at 14%. (2)

10.1.6 The Toyota Conquest does not come with air-conditioning. (2)

10.2 Carefully read the information in **Text B** and say whether the following statements are TRUE or FALSE and give a reason for your answer.

10.2.1 In order to qualify for the Sunbreaks rates, I have to stay at least three nights in a hotel. (2)

10.2.2 I do not qualify for the special Sunbreaks rates on Wednesday, Thursday and Friday nights if I stay at the Breakers B&B. (2)

10.2.3 If my 12-year-old child shares my room with me and my spouse, at the Cabana Beach Hotel, she stays for free, if I make use of the Sunbreaks offer. (2)

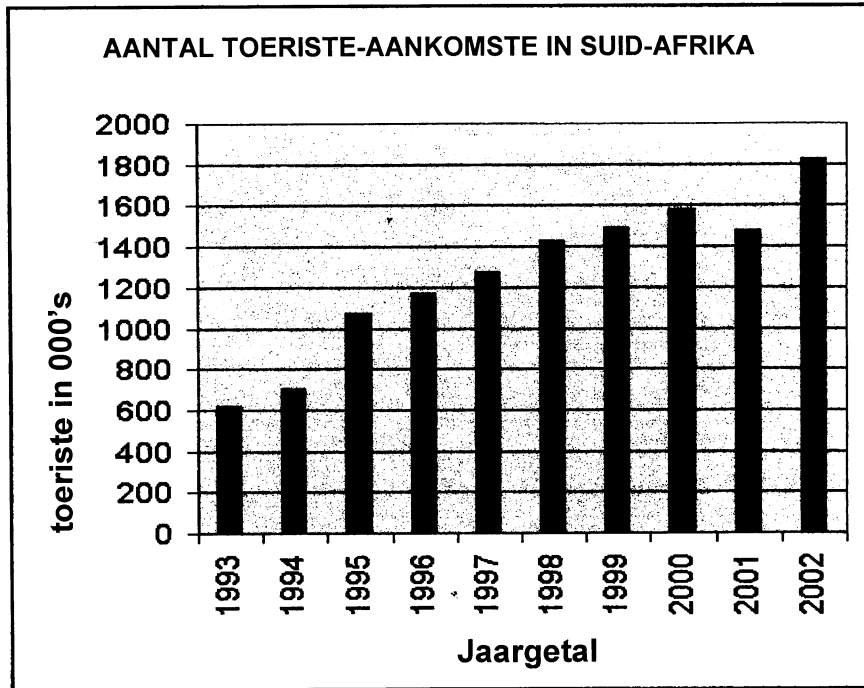
10.2.4 Two people sharing a room at the Beverly Hills Sun pay the same as when one person occupies the room alone. (2)

10.2.5 The Sunbreaks rates for the Cullinan Hotel on the V & A Waterfront in Cape Town are only available on Friday, Saturday and Sunday nights. (2)

10.2.6 If I stay in the Riverside Sun with my soccer team, we are eligible for the special Sunbreaks rates. (2)

10.2.7 Rates include 1% levy. (2)

10.3 Bestudeer die onderstaande grafiek en beantwoord die daaropvolgende vrae.



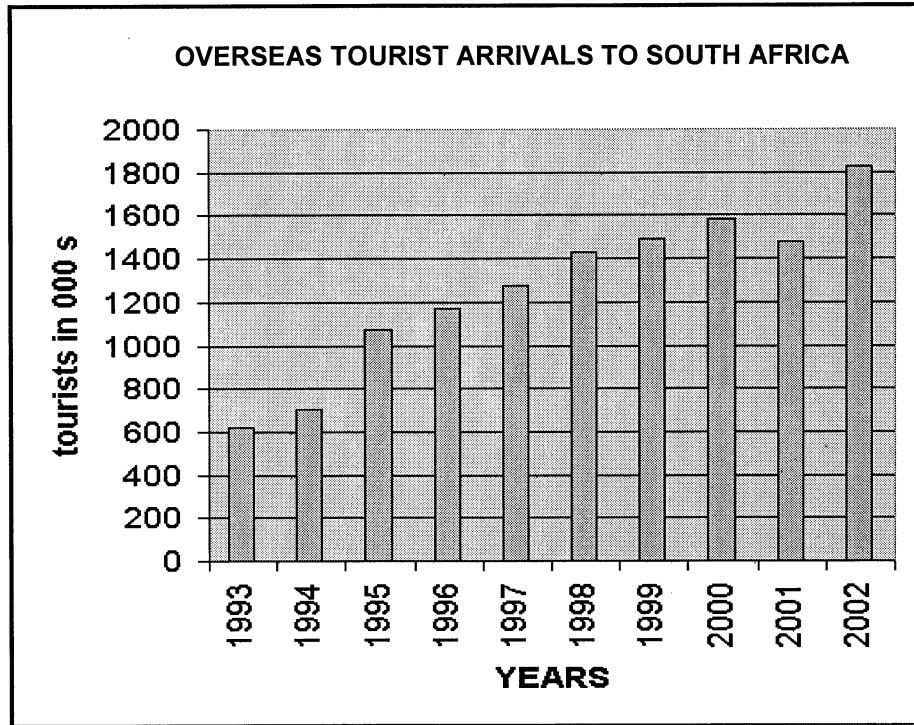
- 10.3.1 Watter gebeurtenis het gedurende 1994 in Suid-Afrika plaasgevind wat veroorsaak het dat die aantal toeriste na Suid-Afrika in 1995 drasties vermeerder het? (1)
- 10.3.2 Watter gebeurtenis het gedurende 2001 in Amerika plaasgevind wat veroorsaak het dat die aantal toeriste na Suid-Afrika daardie jaar afgeneem het? (1)
- 10.3.3 Waarom het die aantal toeriste na Suid-Afrika weselik vermeerder gedurende 2002? (1)
- 10.3.4 Gedurende watter jaar het die tweede meeste aantal buitelandse toeriste na Suid-Afrika toe gekom? (1)

[30]

TOTAAL VIR AFDELING B: [120]

TOTAAL: 150

10.3 Study the graph below, then answer the questions that follow.



- 10.3.1 What event took place in South Africa in 1994 that caused the number of tourists to South Africa to increase dramatically in 1995? (1)
- 10.3.2 What event took place in America in 2001 that caused the number of tourists to South Africa to decrease in that year? (1)
- 10.3.3 Why did the number of tourists to South Africa increase substantially in 2002? (1)
- 10.3.4 In what year did the second highest number of tourists come to South Africa from overseas? (1)

[30]

TOTAL FOR SECTION B: [120]

TOTAL: 150

TEKS A

'n 19 DAE AVONTUUR IN SUID-AFRIKA

'n Reisplan vir 'n welgestelde getroude paartjie in hul veertigs, wat 'n dubbelkamer, 'n dubbelkajuit en 'n dubbelsuite deel vanaf 25 November tot 13 Desember.

Dag 1 Vertrek vanaf Heathrow Lughawe op Suid-Afrikaanse Lugdiens vlug SA 229. Geniet 'n heerlike viergangmaaltyd in u ruim besigheidsklaskajuit, en word bedien deur vriendelike en bevoegde kajuitpersoneel. Na aandete kan u 'n fliëk kyk, na musiek luister of bloot terugsit en slaap. Die volgende môre sal u 'n volledige Engelse ontbyt geniet voordat u op Johannesburg Internasionale Lughawe in B-klas land.

Dag 2 Vandag word u met die hotel se pendelbus oorgeplaas na die Holiday Inn in Pretoria. Die res van die dag is u vry. Verken die aangename voorstad, Hatfield met 'n voortreflike winkelsentrum in die omgewing of koel bloot af in die hotel se swembad.

Dag 3 Na 'n vroeë ontbyt sal u na die Pretoriastasie geneem word waar u die internasionale bekende Blou Trein, een van die wêreld se luuksste treine, sal bestyg. U sal Kimberley om 17:10 bereik en die geleentheid kry om die ontsaglike Groot Gat en fassinerende opelug-mynmuseum te besoek. Om 19:05 reis u weer verder. 'n Gourmetmiddagete en -aandete word in die elegante treinrestaurant bedien.

Dag 4 U sou waarskynlik deur die nag deur die oninteressante, plat Karoolandskap voortgesnel het; die volgende oggend deur die majestieuse berge, groen weivelde en die menigte wingerde van die Wes-Kaap begroet te word. Terwyl u die skilderagtige natuurskoon geniet sal u smul aan 'n heerlike Suid-Afrikaanse ontbyt. Om 12:00 "stoom" u Kaapstad-stasie binne, vanwaar u na die Cullinan Hotel op die V & A Waterfront oorgeplaas sal word. Die res van die dag is u vry en ons beveel aan dat u hierdie kans benut om die opwindende Victoria-en-Alfred-waterfront, reg op u drumpel, te verken.

Dag 5 Onderneem 'n halfdag-middagtoer van die stad wat 'n besoek aan Tafelberg insluit.

Dag 6 Neem 'n voldagtoer van die Kaapse Skiereiland.

Dag 7 Onderneem 'n halfdagtoer na die wynplase in Stellenbosch.

Dag 8 U is vandag vry om u laaste inkopies en besigtigingstoere by die V & A Waterfront af te handel. Vanmiddag sal u aanboord die Montêre passasierskip gaan waar u drie nagte en twee volle dae op see op hierdie luukse en ontspannende skip 'n kusvaart om Suid-Afrika meemaak.

Dag 9 Ter see.

Dag 10 Ter see.

ANNEXURE

TEXT A

A 19 DAY SOUTH AFRICAN ADVENTURE

A tour for a wealthy married couple in their forties, sharing a double room, a double cabin and a double suite, from 25 November to 13 December.

Day 1 Depart London Heathrow airport on South African Airways flight SA 229. Enjoy a delicious four-course meal in your spacious Business Class cabin, with attentive service by the friendly and efficient flight attendants. After dinner, watch a movie, listen to music or simply sit back and sleep. In the morning, you will have a full English breakfast prior to landing at Johannesburg International Airport in B class.

Day 2 Transfer to Holiday Inn Pretoria in the hotel's airport shuttle bus. The day is at leisure. Stroll around the pleasant suburb of Hatfield, visit the upmarket shopping complex nearby, or simply lounge around the hotel swimming pool.

Day 3 After an early breakfast, you will be taken to the Pretoria Central train station where you will board the internationally famous Blue Train, one of the world's most luxurious trains. You will arrive in Kimberley at 17:10 and have the opportunity of seeing the awesome Big Hole and visiting the fascinating open-air Mine Museum. At 19:05 you will be on your way again. A gourmet lunch and dinner are served in the elegant restaurant car.

Day 4 You would have passed through the flat, featureless Karoo landscape during the night, but now, as you awake, you will be greeted by the sight of the majestic mountains, lush farmlands and the bountiful vineyards of the Western Cape. Enjoy a scrumptious South African breakfast while you enjoy the magnificent scenery. At 12:00 you glide into Cape Town station on the foreshore and you will transfer to the Cullinan Hotel on the V & A Waterfront. The rest of the day is at leisure, but we strongly recommend that you take this opportunity to explore the vibrant Victoria and Alfred Waterfront which is right on your doorstep.

Day 5 Take a half-day afternoon tour of the city including a visit to Table Mountain.

Day 6 Take a full-day tour of the Cape Peninsula.

Day 7 Take a half-day tour of the Wine estates in Stellenbosch.

Day 8 You are at leisure, so do some last-minute sightseeing and shopping at the V&A Waterfront. This afternoon you will board the cruise liner Monterey and spend the next three nights and two full days at sea, on a luxurious and relaxing coastal cruise around South Africa.

Day 9 At sea.

Day 10 At sea.

Dag 11 Ontbyt word bedien terwyl u Afrika se besigste hawe, Durban, nader en kort daarna sal u 'n wonderlike uitsig oor Durban se Goue Myl van strande en hotel hê wanneer u die hawe binnegaan. U sal na die weelderige Elangeni Hotel op Noordstrand oorstap waar u die volgende drie aande sal tuisgaan. Die res van die dag is u vry om die baie aantreklikhede, almal binne loopafstand, te verken. Sea World is naby u hotel geleë, asook die rickshaw-ritte op Marine Parade.

Dag 12 'n Gehuurd motor van National sal na ontbyt tot jou beskikking wees vir die volgende twee dae. Nou is dit u kans om al die wonderlike aantreklikhede wat Durban bied, gedurende die volgende twee dae te gaan opsoek.

Dag 13 Verken steeds Durban en omliggende omgewing.

Dag 14 Na ontbyt sal u uit die hotel teken en na die Durban Internasionale Lughawe gaan, waar u die motor sal terugbesorg en vlug SA 540 na Johannesburg sal bestyg. Op u aankoms in Johannesburg word u weereens na die Emperor by Ceasars geneem, waar u vry is om die res van die dag te spandeer soos u wil. Gebruik dié kans om die hotel se swembad, dobbelhuis of enige van die ander ontspanningsopsies te benut.

Dag 15 'n Gehuurd motor van National sal na ontbyt by u hotel afgelewer word. Hierna vertrek u deur die eg Afrika-bosveld na Suid-Afrika se enigste weergawe van Las Vegas, genaamd Sun City. U sal die volgende twee nagte en die volgende dag by die Palace of the Lost City vertoef en die ongerepte skoonheid van hierdie deel van Suid-Afrika in u gehuurde motor verken.

Dag 16 Vrye tyd by Sun City en Pilanesberg Nasionale Park.

Dag 17 Na ontbyt reis u na Pretoria, waar u weereens by die Pretoria Holiday Inn in Hatfield sal tuisgaan. Die keer kan u meer avontuurlustig in u gehuurde motor die omgewing verken. Ons stel voor dat u die Uniegeboue en sommige van die ander bekende landmerke van die hoofstad besoek.

Dag 18 Vrye tyd in Pretoria. Vanmiddag sal u by die hotel uitteken en na Johannesburg Internasionale Lughawe ry, waar u die gehuurde motor sal terugbesorg en voortbeweeg na die internasionale vertreksaal. U vlug terug na Londen is op Suid-Afrikaanse Lugdiens vlug SA 234.

Dag 19 Vandag sal u tuis arriveer met baie wonderlike herrinneringe aan u "eenkeer-in- 'n-leef tyd" vakansie in Suid-Afrika!

Day 11 Breakfast will be served as you near Africa's busiest port, Durban, and shortly thereafter, you will have a splendid view of Durban's superb Golden Mile of beaches and hotels as you enter the port. You will transfer to the upmarket Elangeni Hotel, situated on North Beach, which will be your home for the next three nights. The rest of the day is at leisure and we suggest you take time to explore the many attractions, all within walking distance of your hotel, such as Sea World, or why not take a rickshaw ride along the Marine Parade?

Day 12 Your National rental car will be delivered to your hotel after breakfast and will be at your disposal for the next two days. Take this opportunity to explore many of the unique and fascinating attractions Durban has to offer.

Day 13 Explore Durban and surrounding areas.

Day 14 After breakfast you will check out of your hotel and proceed to Durban International Airport, where you will return your rental car and board flight SA 540 to Johannesburg. On arrival in Johannesburg you will be taken to The Emperor at Caesars where you will be at leisure for the rest of the day. Take advantage of the hotel swimming pool, gambling facilities or one of the many other leisure options.

Day 15 Your rental car from National will be delivered to you after breakfast and you then set off across the African bushveld to South Africa's unique version of Las Vegas, Sun City. Spend the next two nights and day at the Palace of the Lost City and explore the untamed beauty of this land in your rental car.

Day 16 At leisure in Sun City and Pilansberg National Park.

Day 17 After breakfast you will transfer to Pretoria, where you will once again check in to the Pretoria Holiday Inn in Hatfield. This time, with your rental car, you will be able to be more adventurous in your exploring and we suggest you visit the Union Buildings, and some of the other famous sights in the capital city.

Day 18 At leisure in Pretoria. This afternoon you will check out of your hotel and proceed to Johannesburg International Airport in your rental car, which you will return at the "rental returns" area, and then make your way to the international departure hall. Your flight home will be on South African Airways flight SA 234 to London.

Day 19 Home again, with many wonderful memories of a once-in-a-lifetime holiday in South Africa!

TEKS B



	SGL	DBL
Riverside Sun (B&B)	554	414
Sabi River Sun (B&B)	590	460
Drakensberg Sun (B&B)	720	535
Umhlanga Sands (B&B)	780	645
Cabana Beach (B&B)	780	645
Breakers (B&B)	780	645
Beacon Island (B&B)	865	730



	SGL	DBL
Cape Town Waterfront	599	427

- Rate is per person, per night & room only



	Includes 2 breakfasts
Van der Walt St Pretoria	249.00
Eastgate	324.00
Nelspruit	324.00
Cape Town, Century City	319.00

- Rate is per room, per night



	SGL	DBL
<i>Cape Town:</i> De Waal	429.00	304.00
Greenmarket Square	424.00	289.00
Newlands	419.00	229.00
Eastern Boulevard	364.00	182.00
<i>Port Elizabeth:</i> Kings Beach	429.00	259.00
<i>Durban:</i> South Beach	359.00	179.50
North Beach	459.00	284.00
Marine Parade	469.00	284.00
<i>Johannesburg:</i> Milpark	399.00	214.00
Airport	444.00	265.00
<i>Sandton:</i> Sandton	489.00	284.00
Sandton City	499.00	309.00
Morningside Sandton	439.00	259.00
<i>Eastgate:</i>	479.00	294.00
<i>Bloemfontein:</i> Bloemfontein	449.00	234.00
<i>East London</i>	429.00	214.50
<i>Wilderness</i>	419.00	319.00
<i>Pietersburg</i>	354.00	177.00
<i>Kimberley</i>	379.00	189.50
<i>Ulundi</i>	454.00	279.00
<i>Umtata</i>	399.00	199.50
<i>Pretoria Hatfield</i>	519.00	309.00

General

- Rates quoted are "Per Person Per Night"
- Subject to availability. Excludes 1% levy



	SGL	DBL
Beverly Hills Sun		
Inter Continental Durban (B&B)	735.00	367.50
Sandton Sun & Towers (B&B)		
Inter Continental Johannesburg - Sun	920.00	460.00
- Towers	1090.00	545.00
Malelane Sun Inter Continental (B&B)	734.00	367.50
Palazzo Inter-Continental	980.00	490.00



	SGL	DBL
Cape Town Waterfront R/O	530	265



	SGL	DBL
Riverside Sun B&B	470.00	235.00
Sabi River Sun B&B	660.00	330.00
Drakensberg Sun D,B&B Mon-Thu	920.00	460.00
Umhlanga Sands B&B *	650.00	325.00
Cabana Beach B&B *	650.00	325.00
Breakers B&B *	650.00	325.00
Beacon Island B&B *	866.00	433.00

- Kids under 18 sharing parents room stay free / Not available for groups / Minimum 2 night stay / Certain hotels and resorts may not be available over peak holiday periods / Cullinan Hotels only available Friday, Saturday and Sunday / Must be fully prepaid / Standard Southern Sun children's policies apply / Excludes 1% levy. High season rates applicable over holiday period and long weekends. Seasonal surcharges apply over Easter and peak periods.

TEXT B



	SGL	DBL
Riverside Sun (B&B)	554	414
Sabi River Sun (B&B)	590	460
Drakensberg Sun (B&B)	720	535
Umhlanga Sands (B&B)	780	645
Cabana Beach (B&B)	780	645
Breakers (B&B)	780	645
Beacon Island (B&B)	865	730



CULLINAN HOTELS

	SGL	DBL
Cape Town Waterfront	599	427

- Rate is per person, per night & room only



Includes 2 breakfasts

Van der Walt St Pretoria	249.00
Eastgate	324.00
Nelspruit	324.00
Cape Town, Century City	319.00

- Rate is per room, per night



	SGL	DBL
<i>Cape Town:</i> De Waal	429.00	304.00
Greenmarket Square	424.00	289.00
Newlands	419.00	229.00
Eastern Boulevard	364.00	182.00
<i>Port Elizabeth:</i> Kings Beach	429.00	259.00
<i>Durban:</i> South Beach	359.00	179.50
North Beach	459.00	284.00
Marine Parade	469.00	284.00
<i>Johannesburg:</i> Milpark	399.00	214.00
Airport	444.00	265.00
<i>Sandton:</i> Sandton	489.00	284.00
Sandton City	499.00	309.00
Morningside Sandton	439.00	259.00
<i>Eastgate:</i>	479.00	294.00
<i>Bloemfontein:</i> Bloemfontein	449.00	234.00
<i>East London</i>	429.00	214.50
<i>Wilderness</i>	419.00	319.00
<i>Pietersburg</i>	354.00	177.00
<i>Kimberley</i>	379.00	189.50
<i>Ulundi</i>	454.00	279.00
<i>Umtata</i>	399.00	199.50
<i>Pretoria Hatfield</i>	519.00	309.00

General

- Rates quoted are "Per Person Per Night"
- Subject to availability, Excludes 1% levy



	SGL	DBL
Beverly Hills Sun		
Inter Continental Durban (B&B)	735.00	367.50
Sandton Sun & Towers (B&B)		
Inter Continental Johannesburg - Sun	920.00	460.00
- Towers	1090.00	545.00
Malelane Sun Inter Continental (B&B)	734.00	367.50
Palazzo Inter-Continental	980.00	490.00



CULLINAN HOTELS

	SGL	DBL
Cape Town Waterfront R/O	530	265



	SGL	DBL
Riverside Sun B&B	470.00	235.00
Sabi River Sun B&B	660.00	330.00
Drakensberg Sun D,B&B Mon-Thu	920.00	460.00
Umhlanga Sands B&B *	650.00	325.00
Cabana Beach B&B *	650.00	325.00
Breakers B&B *	650.00	325.00
Beacon Island B&B *	866.00	433.00

- Kids under 18 sharing parents room stay free / Not available for groups / Minimum 2 night stay / Certain hotels and resorts may not be available over peak holiday periods / Cullinan Hotels only available Friday, Saturday and Sunday / Must be fully prepaid / Standard Southern Sun children's policies apply / Excludes 1% levy. High season rates applicable over holiday period and long weekends. Seasonal surcharges apply over Easter and peak periods.

TEKS C



OFFICIAL
CAR RENTAL
COMPANY TO
INDABA 2002



RATES

GROUP	VEHICLE	CODE	DAILY		EXTENDED RENTAL				WEEKENDER (Min. 2 days, 100 km/day free)
					(Includes 150 free km per day)			(Call for info.)	
			Rate	Per km	4-6 Days (per day)	7+ Days (per day)	MAXI BREAK (Min. 7 days) incl. CDW, TP, PAL	24 + Days (per day)	2-4 Days (per day)
L	FORD TRACER / OPEL CORSA / FIAT PALIO Manual: 1300 hatchback Radio Tape	ECMN	R72	R1.02	R175	R162	R1344	CONTACT YOUR NEAREST NATIONAL BRANCH FOR RATES	R70
A	TOYOTA CONQUEST / FIAT PALIO Manual: 1300, Radio Tape	CDMN	R102	R1.34	R198	R184	R1448		R75
Super A	FORD FIESTA Manual: 1400 Air Conditioned Radio Tape/CD	CDMR	R114	R1.41	R247	R211	R1621		R92
B	FORD IKON / NISSAN ALMERA Manual: 1600 Air Conditioned, Radio Tape	IDMR	R148	R1.54	R305	R254	R2049		R101
C	NISSAN ALMERA Auto: 1800 Air Conditioned Radio Tape Power Steering	IDAR	R271	R2.89	R434	R409	R2753		R259
D	HONDA CIVIC Auto: 1700 Air Conditioned Radio Tape Power Steering	SDAR	R326	R3.09	R481	R454	R3550		R362
E	VOLVO S40 Auto: 2.0 Air Conditioned Radio Tape/CD Power Steering	PDAR	R352	R3.47	R518	R486	R3830		R378
F	VOLVO V40 STATION WAGON Auto 2.0 Air Conditioned Radio Tape/CD Power Steering	PWAR	R373	R3.73	R600	R543	R4026		N/A
M	TOYOTA CONDOR Manual: 1.8 Air Conditioned Radio Tape	FVMR	R234	R2.75	R506	R369	R3260		N/A
G	VW MICROBUS 10 SEATER Manual: 2.3 Air Conditioned Radio Tape Power Steering	SVMR	R444	R4.34	R827	R652	R5226		N/A
H	ONE TON PICK UP 2 Door Long Wheel Base Radio Tape Power Steering Canopy	FPMN	R118	R1.18	R243	R217	R1655	N/A	
J	DOUBLE CAB 3.2 Air Conditioned Radio Tape Power Steering ABS Brakes	FFMR	R450	R3.31	R662	R587	R4761	N/A	

INSURANCE

GROUP	VEHICLE	CODE	CDW	EXEC CDW	THEFT PROTECTION	EXEC TP	CDW/TP EXCESS RESPONSIBILITY	PERSONAL ACCIDENT INSURANCE
	FORD TRACER OR FIAT PALIO	ECMN	R47	R79	R24	R56	R3 400	R16
	TOYOTA TAZZ OR SIMILAR	CDMN	R47	R79	R24	R56	R3 550	R16
	FORD FIESTA	CDMR	R49	R83	R24	R58	R5 400	R16
B	FORD IKON / NISSAN ALMERA	IDMR	R50	R83	R25	R58	R6 750	R16
C	NISSAN ALMERA	IDAR	R50	R83	R25	R58	R7 500	R16
D	HONDA CIVIC	SDAR	R60	R86	R31	R72	R9 800	R16
E	VOLVO S40	PDAR	R62	R92	R31	R76	R10 500	R16
F	VOLVO V40 STATION WAGON	PWAR	R67	R111	R37	R107	R13 000	R16
M	TOYOTA CONDOR	FVMR	R60	R116	R31	R72	R9 000	R16
G	VW MICROBUS - 10 SEATER	SVMR	R64	R122	R43	R122	R12 000	R16
H	ONE TON PICK UP	FPMN	R56	N/A	R31	N/A	R10 000	N/A
J	DOUBLE CAB	FFMR	R62	R132	R47	R112	R13 500	R16

NOTE: Rates are fixed, non discountable & subject to change without notice.

RATES EXCLUDE: Fuel, Contract Fee (R15.00), Airport Surcharge, Tourism Levy, Delivery & Collection Fees, One Way Drop off fee, Additional Driver Surcharge, Personal Accident Insurance, Collision Damage Waiver, Theft Waiver, Optional Equipment.

RATES INCLUDE: VAT @ 14%, 4-6 Day & 7+ Days options include 150 free kilometres per day.

MAXI BREAK INCLUDES: VAT @ 14%, 90% Collision Waiver, 90% Theft Waiver, PAI, 150 free kilometres per day.

TEXT C



**OFFICIAL
CAR RENTAL
COMPANY TO
INDABA 2002**



RATES

GROUP	VEHICLE	CODE	DAILY		EXTENDED RENTAL			WEEKENDER	
					(Includes 150 free km per day)			(Call for info.)	(Min. 2 days, 100 km/day free)
			Rate	Per km	4-6 Days (per day)	7+ Days (per day)	MAXI BREAK (Min 7 days) Incl. CDW, TP, PAL	24 + Days (per day)	2-4 Days (per day)
L	FORD TRACER / OPEL CORSA / FIAT PALIO Manual: 1300 hatchback Radio Tape	ECMN	R72	R1.02	R175	R162	R1344	CONTACT YOUR NEAREST NATIONAL BRANCH FOR RATES	R70
A	TOYOTA CONQUEST / FIAT PALIO Manual: 1300, Radio Tape	CDMN	R102	R1.34	R198	R184	R1448		R75
Super A	FORD FIESTA Manual: 1400 Air Conditioned Radio Tape/CD	CDMR	R114	R1.41	R247	R211	R1621		R92
B	FORD IKON / NISSAN ALMERA Manual: 1600 Air Conditioned Radio Tape	IDMR	R148	R1.54	R305	R254	R2049		R101
C	NISSAN ALMERA Auto: 1600 Air Conditioned Radio Tape Power Steering	IDAR	R271	R2.89	R434	R409	R2753		R259
D	HONDA CIVIC Auto: 1700 Air Conditioned Radio Tape Power Steering	SDAR	R326	R3.09	R481	R454	R3550		R362
E	VOLVO S40 Auto: 2.0 Air Conditioned Radio Tape/CD Power Steering	PDAR	R352	R3.47	R518	R486	R3830		R378
F	VOLVO V40 STATION WAGON Auto: 2.0 Air Conditioned Radio Tape/CD Power Steering	PWAR	R373	R3.73	R600	R543	R4026		N/A
M	TOYOTA CONDOR Manual: 1.8 Air Conditioned Radio Tape	FVMR	R234	R2.75	R506	R369	R3260		N/A
G	VW MICROBUS 10 SEATER Manual: 2.3 Air Conditioned Radio Tape Power Steering	SVMR	R444	R4.34	R827	R652	R5226		N/A
H	ONE TON PICK UP 2 Door Long Wheel Base Radio Tape Power Steering Canopy	FPMN	R118	R1.18	R243	R217	R1655	N/A	
J	DOUBLE CAB 3.2 Air Conditioned Radio Tape Power Steering ABS Brakes	FFMR	R450	R3.31	R662	R587	R4761	N/A	

INSURANCE

GROUP	VEHICLE	CODE	CDW	EXEC CDW	THEFT PROTECTION	EXEC TP	CDW/TP EXCESS RESPONSIBILITY	PERSONAL ACCIDENT INSURANCE
L	FORD TRACER OR FIAT PALIO	ECMN	R47	R79	R24	R56	R3 400	R16
A	TOYOTA TAZZ OR SIMILAR	CDMN	R47	R79	R24	R56	R3 550	R16
Super A	FORD FIESTA	CDMR	R49	R83	R24	R58	R5 400	R16
B	FORD IKON / NISSAN ALMERA	IDMR	R50	R83	R25	R58	R6 750	R16
C	NISSAN ALMERA	IDAR	R50	R83	R25	R58	R7 500	R16
D	HONDA CIVIC	SDAR	R60	R86	R31	R72	R9 800	R16
E	VOLVO S40	PDAR	R62	R92	R31	R76	R10 500	R16
F	VOLVO V40 STATION WAGON	PWAR	R67	R111	R37	R107	R13 000	R16
M	TOYOTA CONDOR	FVMR	R60	R116	R31	R72	R9 000	R16
G	VW MICROBUS - 10 SEATER	SVMR	R64	R122	R43	R122	R12 000	R16
H	ONE TON PICK UP	FPMN	R56	N/A	R31	N/A	R10 000	N/A
J	DOUBLE CAB	FFMR	R62	R132	R47	R112	R13 500	R16

NOTE: Rates are fixed, non discountable & subject to change without notice.
RATES EXCLUDE: Fuel, Contract Fee (R15.00), Airport Surcharge, Tourism Levy, Delivery & Collection Fees, One Way Drop off fee, Additional Driver Surcharge, Personal Accident Insurance, Collision Damage Waiver, Theft Waiver, Optional Equipment.
RATES INCLUDE: VAT @ 14%, 4-6 Day & 7+ Days options include 150 free kilometres per day.
MAXI BREAK INCLUDES: VAT @ 14%, 90% Collision Waiver, 90% Theft Waiver, PAI, 150 free kilometres per day.

TEKS D

DAY TOURS**The Grand Cape Peninsula Tour...**

AN UNFORGETTABLE JOURNEY TO THE MYTHICAL MEETING PLACE OF TWO GREAT OCEANS.

Clifton beaches - Hout Bay & Mariners' Wharf
Boat ride to view seals (optional)
Cape Point & Nature Reserve
Penguin colony at the Boulders (optional R10)
Historic Simon's Town
Groot Constantia Wine Estate **OR**
Kirstenbosch Botanical Gardens

Every Day!

AS ABOVE **Full Day R335**

CAPE POINT ONLY **Half Day R235**

**The Wonderful Winelands**

STELLENBOSCH FRANCHHOEK PAARL.

Your clients will enjoy a relaxing day travelling through the spectacular Cape mountain scenery and lush fertile valleys. They'll taste a mixture of fascinating history and indulge in the pleasures of the renowned Cape Winelands. They will be taken on a cellar tour to view the winemaking process. They will visit at least three historical wine estates and partake in two wine tasting sessions.

Every Day! AS ABOVE **Full Day R335**

STELLENBOSCH ONLY **Half Day R235**

**Best of the Cape...**

(x season!)

Stellenbosch to Cape Point.
Half day Winelands + Half day Cape Peninsula **R440**

**The Afternoon City Tour...**

(incl Table Mountain) . . .

Every Day!

The Morning City Tour

(incl Table Mountain) . . .

(x season!)

This tour is designed to orientate one geographically and culturally showing your client Cape Town from its historical beginnings to the dazzling modern malls of the Waterfront.

Half Day R210 + Cable Car R85

**The Township Tour...**

A cross-cultural alternative tour with our Specialist Guide.

Every Day!

ONE CITY MANY CULTURES... District Six - Bo-Kaap -
Cape Flats - Khayelitsha **Half Day R235**

TEXT D

DAY TOURS



The Grand Cape Peninsula Tour...

AN UNFORGETTABLE JOURNEY TO THE MYTHICAL MEETING PLACE OF TWO GREAT OCEANS.

Clifton beaches - Hout Bay & Mariners' Wharf

Boat ride to view seals (optional)

Cape Point & Nature Reserve

Penguin colony at the Boulders (optional R10)

Historic Simon's Town

Groot Constantia Wine Estate **OR**

Kirstenbosch Botanical Gardens

Every Day!

AS ABOVE Full Day R335

CAPE POINT ONLY Half Day R235



The Wonderful Winelands

STELLENBOSCH FRANCHHOEK PAARL.

Your clients will enjoy a relaxing day travelling through the spectacular Cape mountain scenery and lush fertile valleys.

They'll taste a mixture of fascinating history and indulge in the pleasures of the renowned Cape Winelands. They will

be taken on a cellar tour to view the winemaking process.

They will visit at least three historical wine estates and partake in two wine tasting sessions.

Every Day!

AS ABOVE Full Day R335

STELLENBOSCH ONLY Half Day R235



Best of the Cape...

in season!

Stellenbosch to Cape Point.

Half day Winelands + Half day Cape Peninsula **R440**



The Afternoon City Tour...

(incl Table Mountain)

Every Day!

The Morning City Tour

(incl Table Mountain)

in season!

This tour is designed to orientate one geographically and culturally showing your client Cape Town from its historical beginnings to the dazzling modern malls of the Waterfront.

Half Day R210 + Cable Car R85



The Township Tour...

A cross-cultural alternative tour with our Specialist Guide.

Every Day!

ONE CITY MANY CULTURES... District Six - Bo-Kaap - Cape Flats - Khayelitsha

Half Day R235

TEKS E

How To Use This Timetable



SCHEDULE

DAY	TIME	TIME	FLIGHT 1	FLIGHT 2	VIA
1	2	3	4	5	6

FROM CAPE TOWN SOUTH AFRICA (JNB) GMT+0200

TO DURBAN
 DX67 0630 0625 SA600 NONSTOP
 67 0810 1100 SA654
 DAILY 0915 1110 SA606 NONSTOP

TO EDINBURGH
 DAILY 1935 0955+1 SA220 SA7620 LHR

The schedule above is for illustrative purposes only.

- 1 DAY/S OF DEPARTURE - DX67 operates all days excluding 6 and 7 (Day one commences on a Monday)
- 2 DEPARTURE TIME
- 3 ARRIVAL TIME +1 denotes next day arrival
- 4 FIRST FLIGHT NUMBER
- 5 SECOND FLIGHT NUMBER
- 6 VIA POINTS

THE FOLLOWING DAYLIGHT SAVINGS TIME VARIATIONS APPLY:

a 1 hour later from 7 Oct
 c 1 hour later until 7 Apr and from 2 Sep
 u 1 hour earlier from 31 Aug

THE FOLLOWING EFFECTIVE DATES APPLY:

v Flights effective 1 April
 w Flights effective 1 June
 x Flights effective 1 August
 y Flights effective 1 September
 z Flights effective 1 October

DAY	TIME	TIME	FLIGHT 1	FLIGHT 2	VIA
From LONDON UNITED KINGDOM (LHR) GMT+0100					
To EAST LONDON					
1347	1930	1010+1	SA235	SA1403	JNB
6	1930	1055+1	SA235	SA465	JNB
DX5	2105	1410+1	SA221	SA1373	CPT
DX5	2130	1320+1	SA229	SA471	JNB
5	2130	1305+1	SA229	SA1413	JNB
To ENTEBBE/KAMPALA					
257	1930	1400+1	SA235	SA160	JNB
To GABORONE					
DX26	1930	1050+1	SA235	SA1763	JNB
DX56	2130	1405+1	SA229	SA1765	JNB
6	2130	1605+1	SA229	SA1773	JNB
To GEORGE					
Daily	2130	1335+1	SA229	SA817	JNB
To HARARE					
Daily	2130	1215+1	SA229	SA022	JNB
To HOEDSPRUIT					
Daily	2130	1245+1	SA229	SA1221	JNB
To JOHANNESBURG					
DX2	1930	0725+1	SA235	NONSTOP	
Daily	2130	0925+1	SA229	NONSTOP	
To KIMBERLEY					
1347	1930	1025+1	SA235	SA1103	JNB
56	2130	1400+1	SA229	SA1113	JNB
To LILONGWE					
347	1930	1240+1	SA235	SA170	JNB
To LUANDA					
135	1930	1230+1	SA235	SA054	JNB
To LUSAKA					
Daily	2130	1305+1	SA229	SA064	JNB
To MANZINI					
Daily	2130	1410+1	SA229	SA8984	JNB
To MAPUTO					
Daily	2130	1510+1	SA229	SA144	JNB
To MARGATE					
Daily	2130	1320+1	SA229	SA8140	JNB
To MASERU					
DX2	1930	1025+1	SA235	SA8052	JNB
To MAURITIUS					
DX2	1930	1505+1	SA235	SA190	JNB
To NAIROBI					
DX2	1930	1400+1	SA235	SA182	JNB
To NELSPRUIT					
1347	1930	1110+1	SA235	SA8126	JNB
56	1930	1155+1	SA235	SA8128	JNB
To PHALABORWA					
DX6	2130	1140+1	SA229	SA8022	JNB
To PIETERMARITZBURG					
DX25	1930	1115+1	SA235	SA8036	JNB
Daily	2130	1440+1	SA229	SA8038	JNB

DAY	TIME	TIME	FLIGHT 1	FLIGHT 2	VIA
From JOHANNESBURG SOUTH AFRICA (JNB) GMT+0200					
To HARARE					
Daily	1040	1215	SA022	NONSTOP	
1237	1930	2105	SA024	NONSTOP	
To HOEDSPRUIT					
Daily	1135	1245	SA1221	NONSTOP	
To HONG KONG					
1346	1250	0810+1	SA7800	NONSTOP	
2357	1700	1215+1	SA286	NONSTOP	
To HOUSTON					
357	1720	1530+1	SA209	SA7041	ATL
357	1720	1354+1	SA209	SA7045	ATL
1246	2010	1530+1	SA211	SA7041	ATL
1246	2010	1354+1	SA211	SA7045	ATL
To KIGALI					
7	0915	1315	Y2112	NONSTOP	
To KIMBERLEY					
DX67	0600	0725	SA1101	NONSTOP	
DX67	0800	1025	SA1103	NONSTOP	
67	1235	1400	SA1113	NONSTOP	
DX67	1350	1515	SA1105	NONSTOP	
DX6	1745	1910	SA1107	NONSTOP	
To LAGOS					
135	1615	2125	SA203	NONSTOP	
To LAS VEGAS					
357	1720	1307+1	SA209	SA7047	ATL
1246	2010	1307+1	SA211	SA7047	ATL
To LEEDS BRADFORD					
Daily	2045	0925+1	SA234	SA7628	LHR
To LEIPZIG					
DX5	1915	1010+1	SA260	SA7526	FRA
5	1915	1005+1	SA260	SA7526	FRA
To LILONGWE					
145	1020	1240	SA170	NONSTOP	
To LONDON					
DX1	2015	0625+1	SA226	NONSTOP	
Daily	2045	0655+1	SA234	NONSTOP	
To LOS ANGELES					
Daily	1955	1125+1	SA201	SA7341	JFK
1246	2010	1139+1	SA211	SA7049	ATL
To LUANDA					
246	0935	1230	SA054	NONSTOP	
To LUSAKA					
Daily	1105	1305	SA064	NONSTOP	
To LYON					
Daily	2005	1015+1	SA274	SA7450	ZRH
To MALELANE					
1357	1240	1330	SA8060	NONSTOP	
To MANCHESTER					
Daily	2045	0945+1	SA234	SA7608	LHR
To MANZINI					
Daily	0650	0750	SA8980	NONSTOP	
Daily	0955	1055	SA8982	NONSTOP	

TEXT E

How To Use This Timetable



SCHEDULE

DAY	TIME	TIME	FLIGHT 1	FLIGHT 2	VIA
1	2	3	4	5	6
FROM CAPE TOWN SOUTH AFRICA (JNB) GMT+0200					
TO DURBAN					
DX67	0630	0825	SA600	NONSTOP	
67	0810	1100	SA654	NONSTOP	
DAILY	0915	1110	SA606	NONSTOP	
TO EDINBURGH					
DAILY	1935	0955+1	SA220	SA7620	LHR

The schedule above is for illustrative purposes only.

- 1 DAYS OF DEPARTURE - DX67 operates all days excluding 6 and 7 (Day one commences on a Monday)
- 2 DEPARTURE TIME
- 3 ARRIVAL TIME +1 denotes next day arrival
- 4 FIRST FLIGHT NUMBER
- 5 SECOND FLIGHT NUMBER
- 6 VIA POINTS

THE FOLLOWING DAYLIGHT SAVINGS TIME VARIATIONS APPLY:

- a 1 hour later from 7 Oct
- c 1 hour later until 7 Apr and from 2 Sep
- u 1 hour earlier from 31 Aug

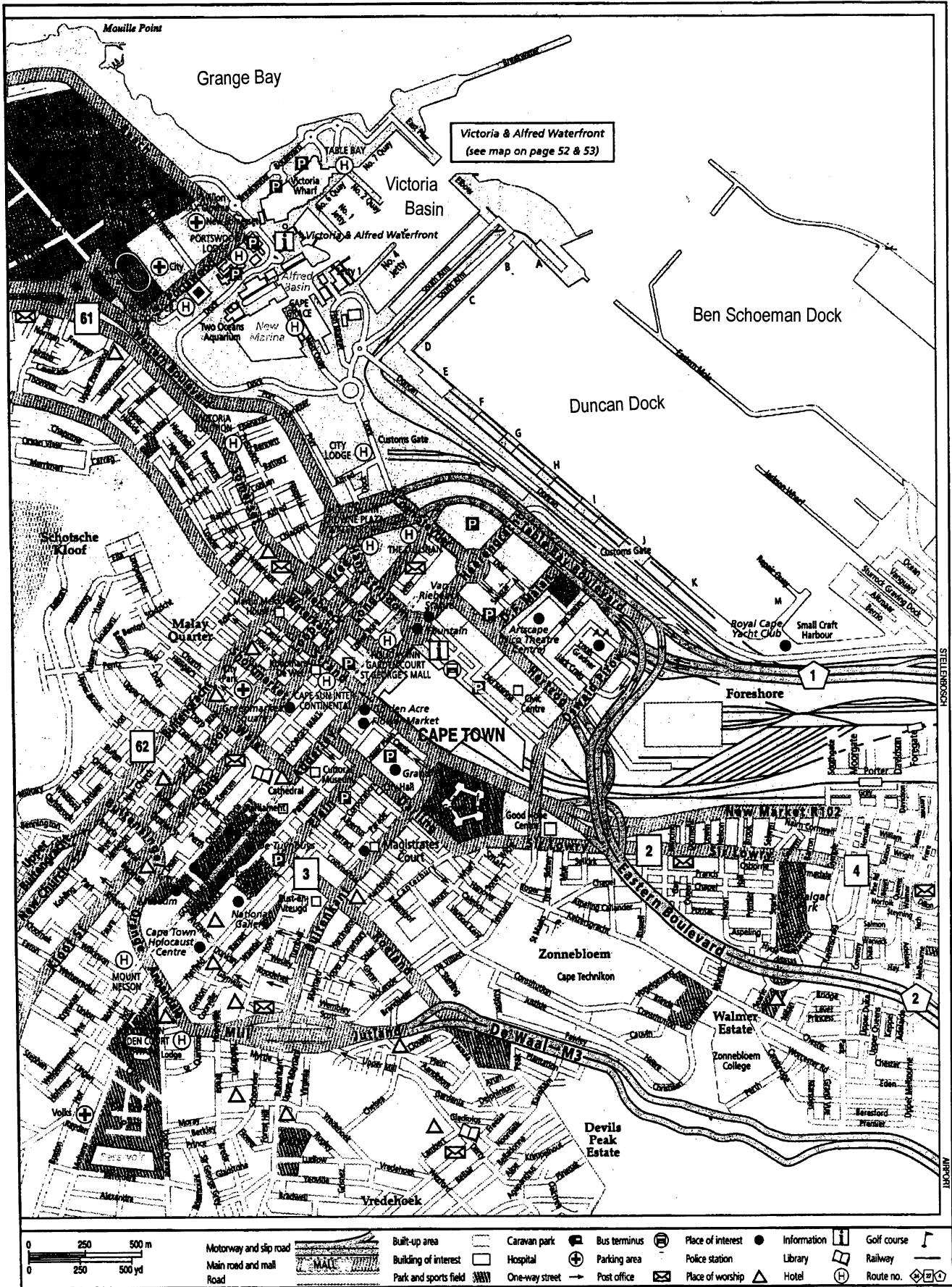
THE FOLLOWING EFFECTIVE DATES APPLY:

- v Flights effective 1 April
- w Flights effective 1 June
- x Flights effective 1 August
- y Flights effective 1 September
- z Flights effective 1 October

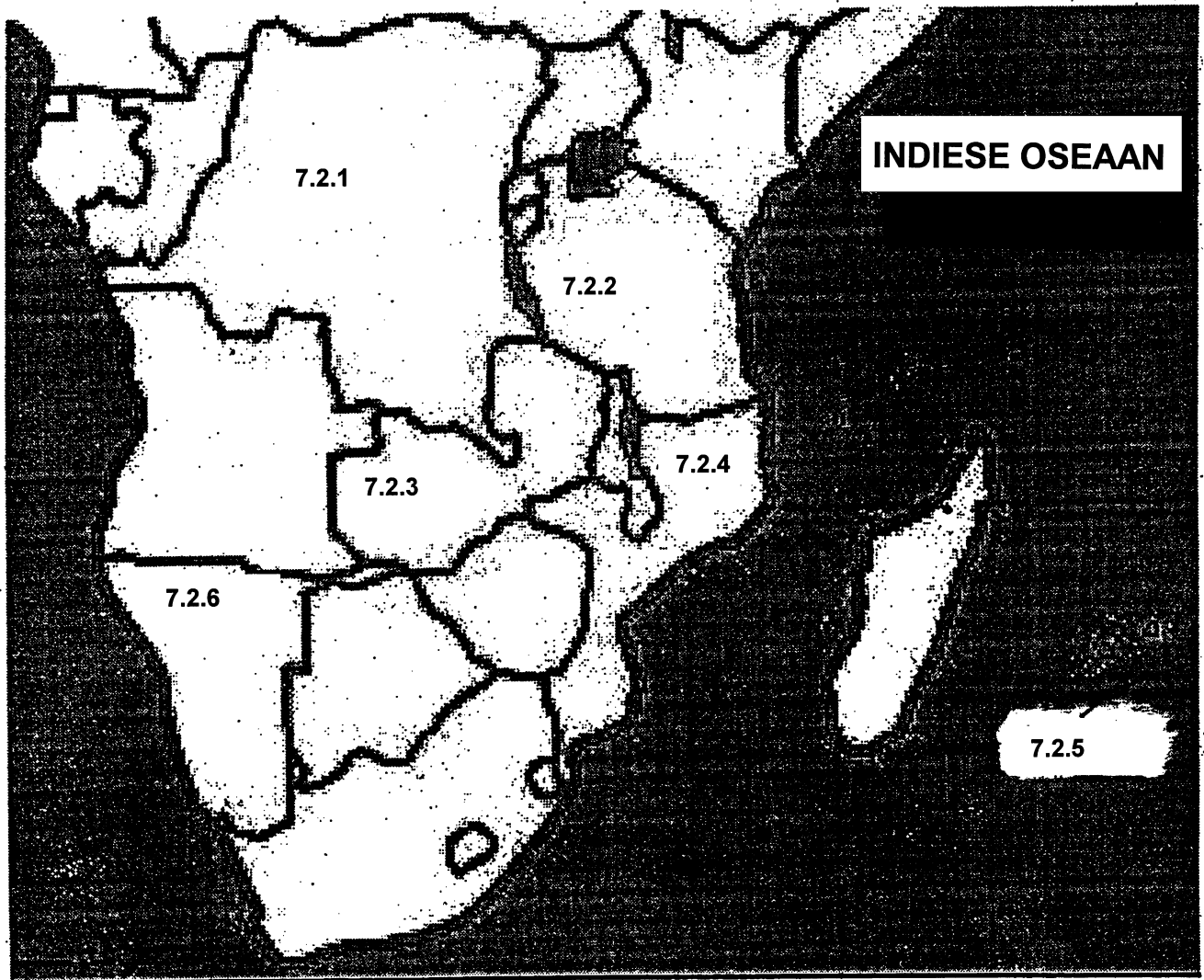
DAY	TIME	TIME	FLIGHT 1	FLIGHT 2	VIA
From LONDON UNITED KINGDOM (LHR) GMT+0100					
To EAST LONDON					
1347	1930	1010+1	SA235	SA1403	JNB
6	1930	1055+1	SA235	SA4465	JNB
DX5	2105	1410+1	SA221	SA1373	CPT
DX5	2130	1320+1	SA229	SA4471	JNB
5	2130	1305+1	SA229	SA1413	JNB
To ENTEBBE/KAMPALA					
257	1930	1400+1	SA235	SA160	JNB
To GABORONE					
DX26	1930	1050+1	SA235	SA1763	JNB
DX56	2130	1405+1	SA229	SA1765	JNB
6	2130	1605+1	SA229	SA1773	JNB
To GEORGE					
Daily	2130	1335+1	SA229	SA817	JNB
To HARARE					
Daily	2130	1215+1	SA229	SA022	JNB
To HOEDSPRUIT					
Daily	2130	1245+1	SA229	SA1221	JNB
To JOHANNESBURG					
DX2	1930	0725+1	SA235	NONSTOP	
Daily	2130	0925+1	SA229	NONSTOP	
To KIMBERLEY					
1347	1930	1025+1	SA235	SA1103	JNB
56	2130	1400+1	SA229	SA1113	JNB
To LILONGWE					
247	1930	1240+1	SA235	SA170	JNB
To LUANDA					
135	1930	1230+1	SA235	SA054	JNB
To LUSAKA					
Daily	2130	1305+1	SA229	SA064	JNB
To MAHZINI					
Daily	2130	1410+1	SA229	SA8984	JNB
To MAPUTO					
Daily	2130	1510+1	SA229	SA144	JNB
To MARGATE					
Daily	2130	1320+1	SA229	SA8140	JNB
To MASERU					
DX2	1930	1025+1	SA235	SA8052	JNB
To MAURITIUS					
DX2	1930	1505+1	SA235	SA190	JNB
To NAIROBI					
DX2	1930	1400+1	SA235	SA182	JNB
To NELSPRUIT					
1347	1930	1110+1	SA235	SA8126	JNB
56	1930	1155+1	SA235	SA8128	JNB
To PHALABORWA					
DX6	2130	1140+1	SA229	SA8022	JNB
To PIETERMARITZBURG					
DX25	1930	1115+1	SA235	SA8036	JNB
Daily	2130	1440+1	SA229	SA8038	JNB

DAY	TIME	TIME	FLIGHT 1	FLIGHT 2	VIA
From JOHANNESBURG SOUTH AFRICA (JNB) GMT+0200					
To HARARE					
Daily	1040	1215	SA022	NONSTOP	
1237	1930	2105	SA024	NONSTOP	
To HOEDSPRUIT					
Daily	1135	1245	SA1221	NONSTOP	
To HONG KONG					
1346	1250	0810+1	SA7800	NONSTOP	
2357	1700	1215+1	SA286	NONSTOP	
To HOUSTON					
357	1720	1530+1	SA209	SA7041	ATL
357	1720	1354+1	SA209	SA7045	ATL
1246	2010	1530+1	SA211	SA7041	ATL
1246	2010	1354+1	SA211	SA7045	ATL
To KIGALI					
7	0915	1315	Y2112	NONSTOP	
To KIMBERLEY					
DX67	0600	0725	SA1101	NONSTOP	
DX67	0900	1025	SA1103	NONSTOP	
67	1235	1400	SA1113	NONSTOP	
DX67	1350	1515	SA1105	NONSTOP	
DX6	1745	1910	SA1107	NONSTOP	
To LAGOS					
135	1615	2125	SA203	NONSTOP	
To LAS VEGAS					
357	1720	1307+1	SA209	SA7047	ATL
1246	2010	1307+1	SA211	SA7047	ATL
To LEEDS BRADFORD					
Daily	2045	0925+1	SA234	SA7628	LHR
To LEIPZIG					
DX5	1915	1010+1	SA260	SA7526	FRA
5	1915	1005+1	SA260	SA7526	FRA
To LILONGWE					
145	1020	1240	SA170	NONSTOP	
To LONDON					
DX1	2015	0625+1	SA226	NONSTOP	
Daily	2045	0655+1	SA234	NONSTOP	
To LOS ANGELES					
Daily	1955	1125+1	SA201	SA7341	JFK
1246	2010	1139+1	SA211	SA7049	ATL
To LUANDA					
246	0935	1230	SA054	NONSTOP	
To LUSAKA					
Daily	1105	1305	SA064	NONSTOP	
To LYON					
Daily	2005	1015+1	SA274	SA7450	ZRH
To MALELANE					
1357	1240	1330	SA8060	NONSTOP	
To MANCHESTER					
Daily	2045	0945+1	SA234	SA7608	LHR
To MANZINI					
Daily	0650	0750	SA8980	NONSTOP	
Daily	0955	1055	SA8982	NONSTOP	

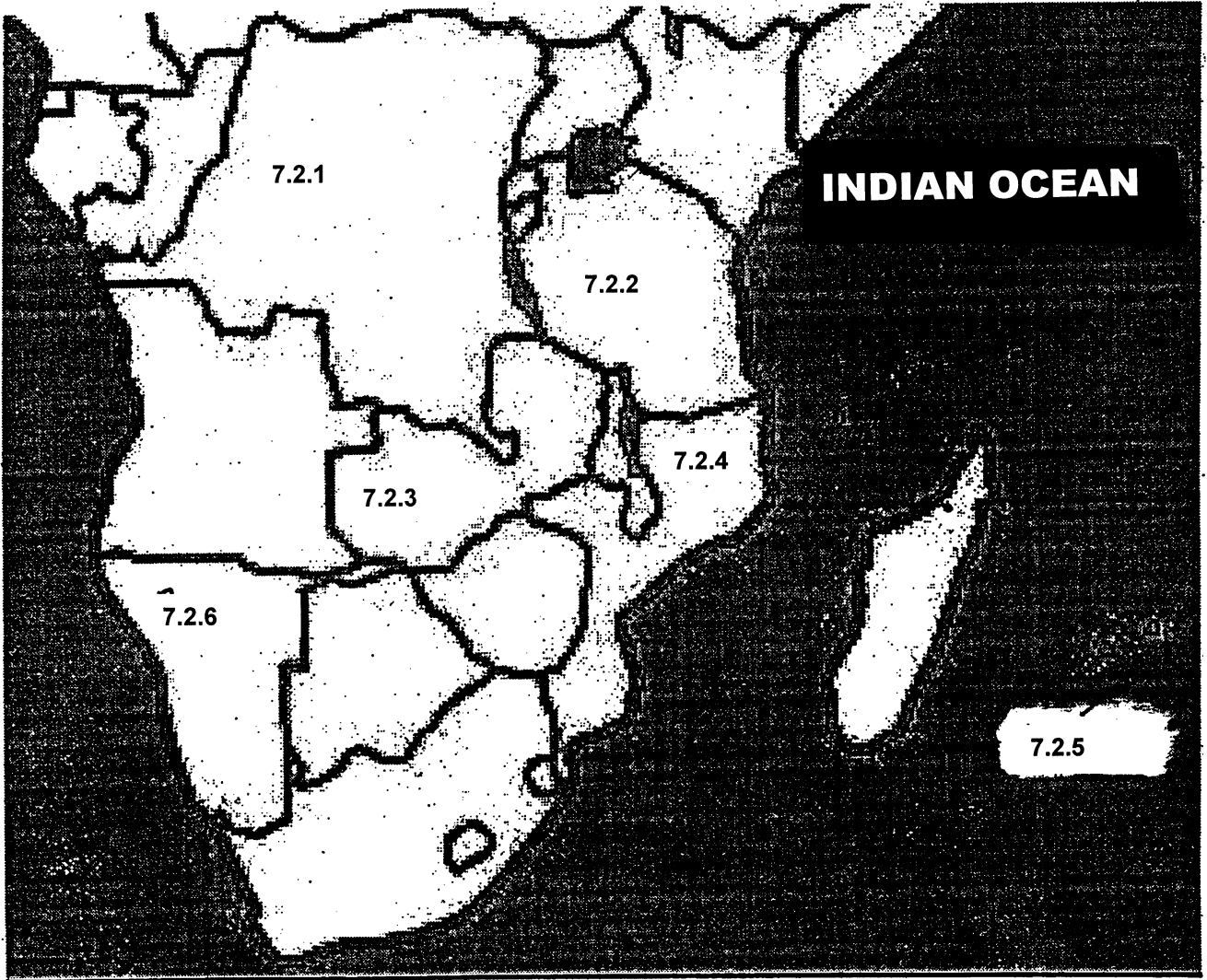
TEKS F



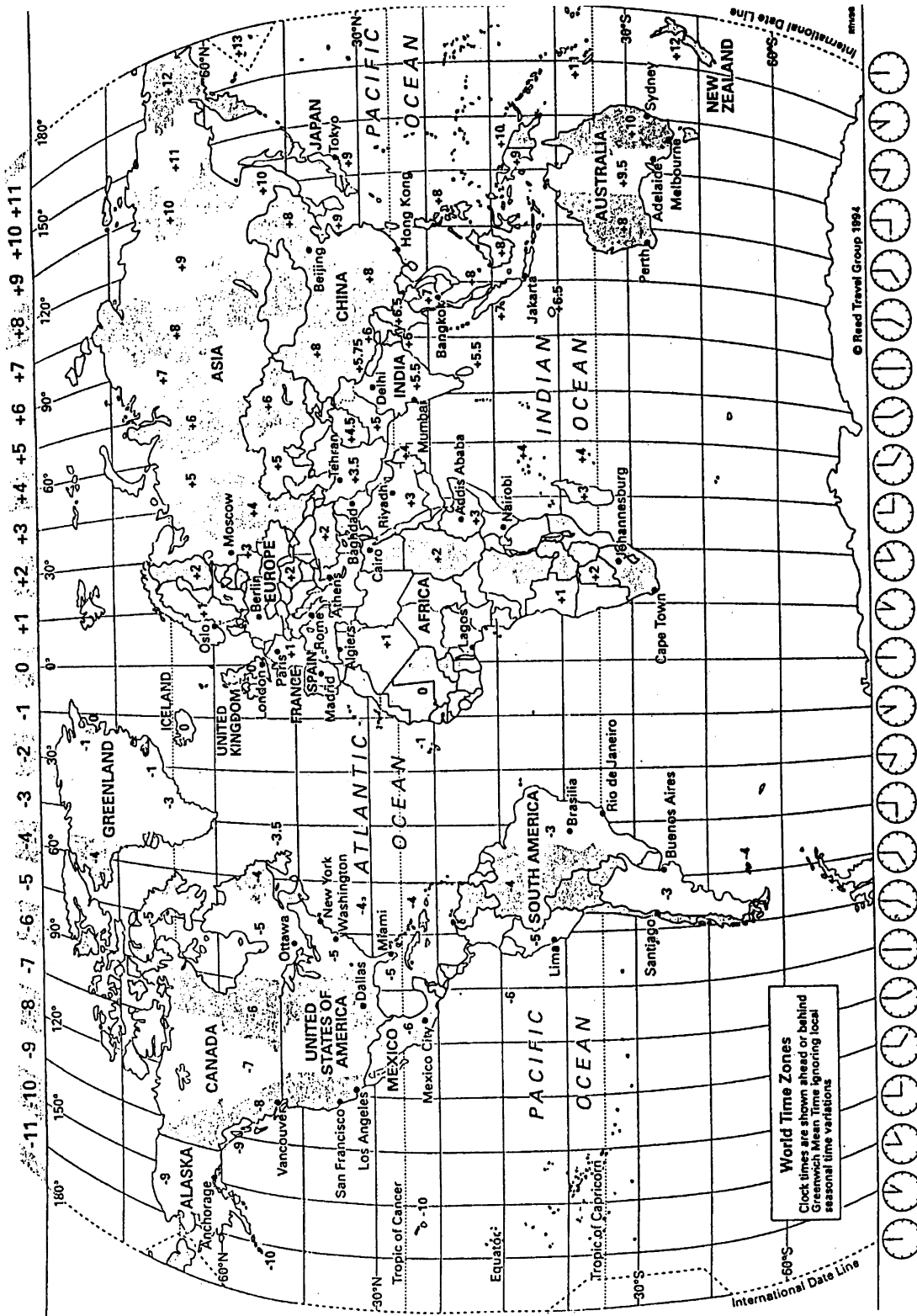
TEKS G



TEXT G

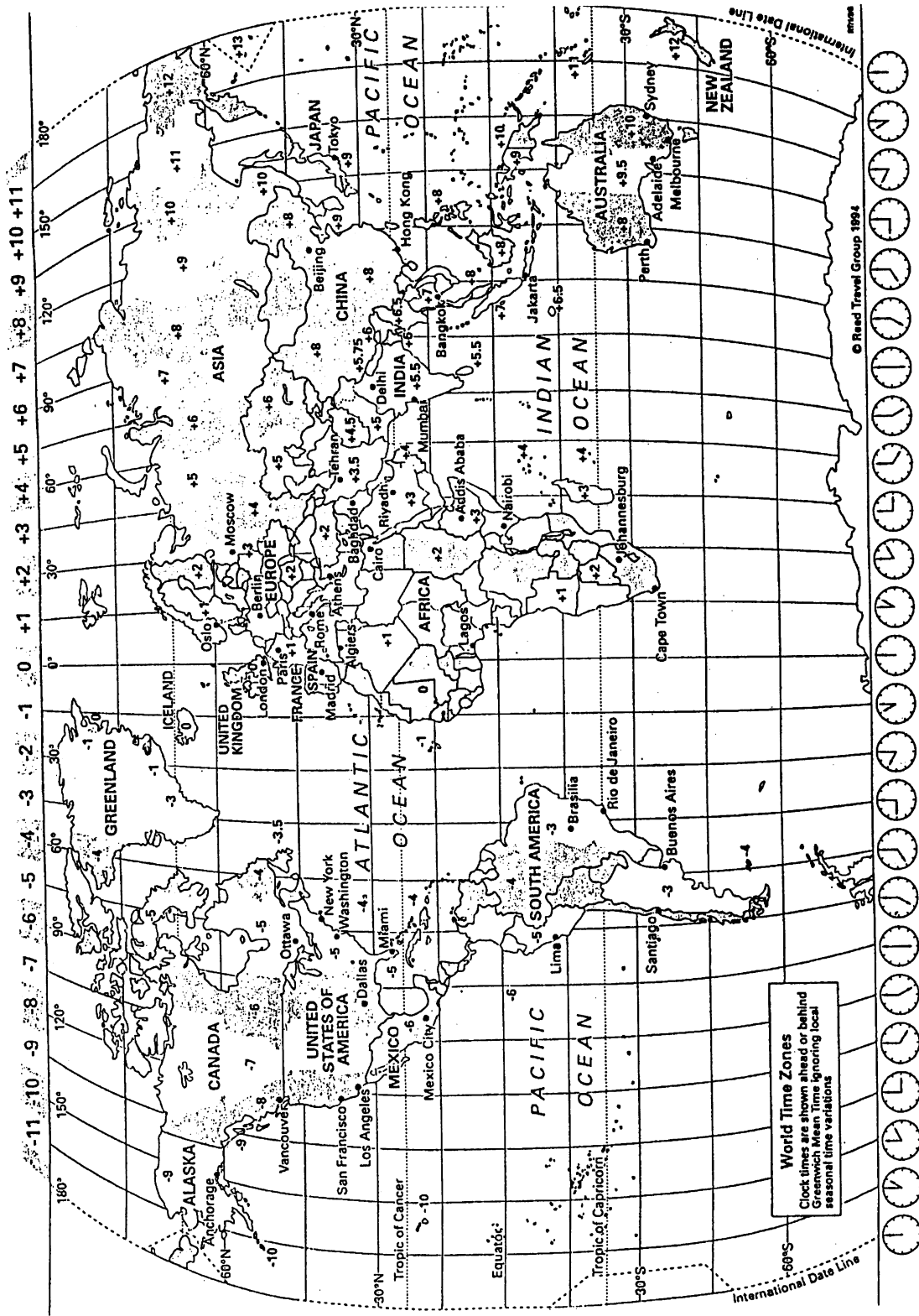


TEKS H



© Reed Travel Group 1994

TEXT H



© Reed Travel Group 1994